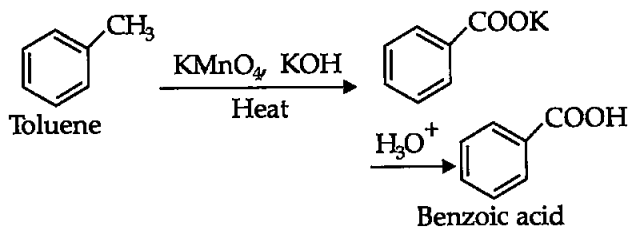
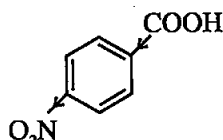
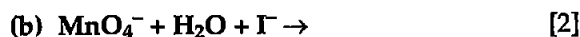


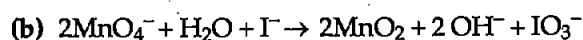
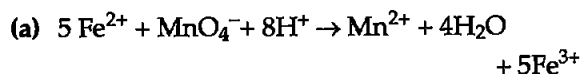
(b) Conversion of toluene to benzoic acid :

OR

- (a) Aromatic carboxylic acids do not undergo Friedel-Crafts reaction because the carboxyl group is deactivating for electrophilic substitution reaction, secondarily, the catalyst aluminium chloride gets bonded to the carboxyl group.
- (b) pK_a value of 4-Nitrobenzoic acid is lower than benzoic acid, which means 4-Nitrobenzoic acid is more acidic than the benzoic acid. Being an electron withdrawing group, the $-\text{NO}_2$ group withdraws electrons towards itself resulting in ease of carboxylic proton release, hence increasing the acidity.

**10. Complete and balance the following chemical equations :**

Answer :

**11. Give reasons for the following :** [3]

- (a) Measurement of osmotic pressure method is preferred for the determination of molar masses of macromolecules such as proteins and polymers.
- (b) Aquatic animals are more comfortable in cold water than in warm water.
- (c) Elevation of boiling point of 1 M KCl solution is nearly double than that of 1 M sugar solution.

Answer :

- (a) Molar masses of macromolecules like polymers and proteins are measured

through osmotic pressure method. The osmotic pressure method uses 'molarity' of solution (instead of molality) which has a large magnitude even for dilute solutions, given that polymers have poor solubility, osmotic pressure measurement is used for determination of their molar masses. Macromolecules such as proteins are not stable at high temperatures and because measurement of osmotic pressure is done at around room temperature, it is useful for determination of molar masses of proteins.

- (b) Solubility of gases in liquid decreases on increasing the temperature. Hence, the availability of dissolved oxygen in water is more at lower temperatures hence, the aquatic animals feel more comfortable at lower temperatures than at the higher temperatures.
- (c) Elevation of boiling point is a colligative property and hence depends on the number of solute particles in the solution. Now, 1 M KCl would have twice the number of solute particles, as KCl dissociates into K^+ and Cl^- , compared to sugar solution (as sugar does not undergo any dissociation). So, elevation of boiling point is nearly double for 1 M KCl solution compared to 1 M sugar solution.

12. An element 'X' (At. mass = 40 g mol^{-1}) having f.c.c. structure, has unit cell edge length of 400 pm. Calculate the density of 'X' and the number of unit cells in 4 g of 'X'. ($N_A = 6.022 \times 10^{23} \text{ mol}^{-1}$)** [3]

13. A first order reaction is 50% completed in 40 minutes at 300 K and in 20 minutes at 320 K. Calculate the activation energy of the reaction. (Given : $\log 2 = 0.3010$, $\log 4 = 0.6021$, $R = 8.314 \text{ JK}^{-1} \text{ mol}^{-1}$) [3]

Answer : Rate constant for a first order reaction is given by,

$$k = \frac{2.303}{t} \log \left[\frac{R_0}{R_1} \right]$$

So, at 300 K,

$$\begin{aligned} k_{300} &= \frac{2.303}{40} \log \left(\frac{100}{50} \right) \\ &= 0.058 \times \log 2 \\ &= 0.058 \times 0.301 \\ &= 0.017 \end{aligned}$$

$$k_{320} = \frac{2.303}{20} \log \left(\frac{100}{50} \right)$$

** Answer is not given due to change in present syllabus.

$$= 0.11 \times \log 2$$

$$= 0.11 \times 0.3010 = 0.034$$

$$\text{Now, } \log \frac{k_{320}}{k_{300}} = \left(\frac{E_a}{2.303R} \right) \left[\frac{T_2 - T_1}{T_1 T_2} \right]$$

Putting the values,

$$\log \frac{0.034}{0.017} = \left(\frac{E_a}{2.303 \times 8.314 \text{ J K}^{-1} \text{ mol}^{-1}} \right)$$

$$\left[\frac{320 - 300}{320 \times 300} \right] \text{ K}$$

$$0.3010 = \frac{E_a}{19.14(0.0002)}$$

$$E_a = 28,805.7 \text{ J mol}^{-1} = 28.80 \text{ kJ mol}^{-1}$$

14. What happens when [3]

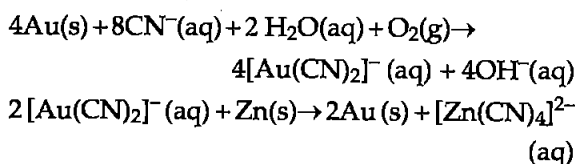
- a freshly prepared precipitate of $\text{Fe}(\text{OH})_3$ is shaken with a small amount of FeCl_3 solution ?
- persistent dialysis of a colloidal solution is carried out ?
- an emulsion is centrifuged ?

Answer :

- When FeCl_3 is added to a freshly prepared precipitate of $\text{Fe}(\text{OH})_3$, a positively charged sol of hydrated ferric oxide is formed due to adsorption of Fe^{3+} ions.
 - When persistent dialysis of colloidal solution is carried out, traces of electrolytes present in the sol are removed almost completely leaving the colloids unstable and finally coagulation takes place.
 - Emulsions are centrifuged to separate them into constituent liquids.
15. Write the chemical reactions involved in the process of extraction of Gold. Explain the role of dilute NaCN and Zn in this process. [3]

Answer : Extraction of gold involves leaching the metal with dilute solution of NaCN or KCN in the presence of air (for O_2) from which the metal is obtained later by replacement method (using Zinc).

The reactions involved are :



16. Give reasons :

- E° value for $\text{Mn}^{3+}/\text{Mn}^{2+}$ couple is much more positive than that for $\text{Fe}^{3+}/\text{Fe}^{2+}$.
- Iron has higher enthalpy of atomization than that of copper .
- Sc^{3+} is colourless in aqueous solution whereas Ti^{3+} is coloured. [3]

Answer :

- Mn^{2+} has a d^5 configuration, and the extra stability of half filled d -orbitals is compromised when another electron is taken out to give Mn^{3+} , On the contrary Fe^{3+} attains a half filled orbital configuration when Fe^{2+} gets oxidized to Fe^{3+} . Hence, the E° value for $\text{Mn}^{3+}/\text{Mn}^{2+}$ couple has more positive E° value.
 - Fe has a $3d^6 4s^2$ outer electronic configuration whereas Cu has $3d^{10} 4s^1$ configuration. Now, more the number of unpaired electrons in d -orbital, more favourable are interatomic attractions and thus higher atomization enthalpies. Hence, Fe having 4 unpaired d -electrons has more enthalpy of atomization than copper having no unpaired d -electron.
 - Sc^{3+} has a $3d^0$ configuration whereas Ti^{3+} has a $3d^1$ configuration. As there are no electrons in d orbital for Sc^{3+} ion, there is no transition of electrons by absorption of energy and hence no emission in visible range imparting colour to the Sc^{3+} ion.
17. (a) Identify the chiral molecule in the following pair : [3]



(i)

and



(ii)

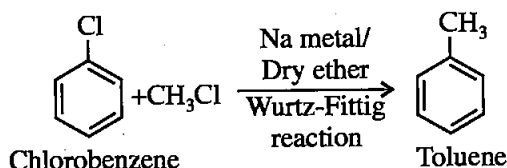
- Write the structure of the product when chlorobenzene is treated with methyl chloride in the presence of sodium metal and dry ether.
- Write the structure of the alkene formed by dehydrohalogenation of 1-bromo-1-methylcyclohexane with alcoholic KOH .

Answer :

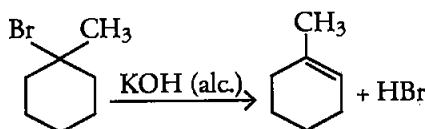
(a) The molecule (i) is a chiral molecule.



(b) Chlorobenzene reacts with methyl chloride in presence of sodium metal and dry ether to give toluene. This reaction is known as Wurtz-Fittig reaction.



(c) In the 1-bromo-1-methylcyclohexane, all β -hydrogen atoms are equivalent. Thus dehydrohalogenation takes place, in the reaction of this compound with KOH.



18. (A), (B) and (C) are three non-cyclic functional isomers of a carbonyl compound with molecular formula C_4H_8O . Isomers (A) and (C) give positive Tollen's test whereas isomer (B) does not give Tollen's test but gives positive Iodoform test. Isomers (A) and (B) on reduction with Zn (Hg)/conc. HCl give the same product (D).

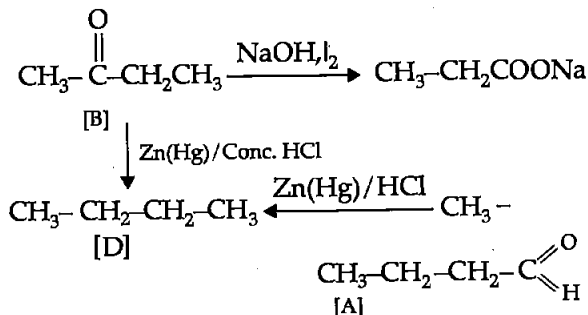
(a) Write the structures of (A), (B), (C) and (D).

(b) Out of (A), (B) and (C) isomers, which one is least reactive towards addition of HCN? [3]

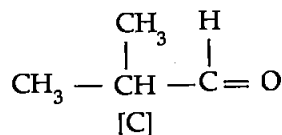
Answer :

(a) Compound A and C give positive Tollen's test which indicates that they are aldehydes. Compound C gives Iodoform test which means it contains a carbonyl group with a methyl group attached to the carbonyl carbon so, with formula C_4H_8O the structure of compound would be $CH_3COCH_2CH_3$ (Butanone). Now upon reduction with Zn(Hg)/conc. HCl, the corresponding alkanes are obtained, so reduction of B gives Butane (D), so the isomer

A have to be a linear chain aldehyde (Butanal), giving Butane (compound D) on reduction. So, the last isomer possible is compound C, 2-Methyl propanaldehyde. The reactions involved are shown below with the structures of compounds :

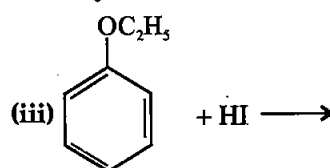
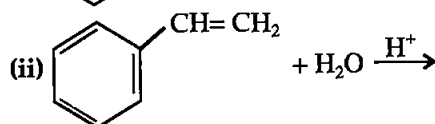
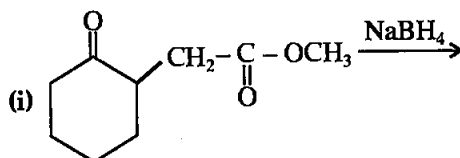


isomer of [A] is compound [C] whose structure is



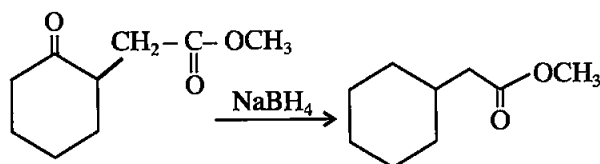
(b) Out of the three isomers A, B and C, compound B (Butanone) would be least reactive towards addition of HCl as the carbonyl carbon is sterically hindered and most reactive would be compound A (Butanal) towards addition of HCN.

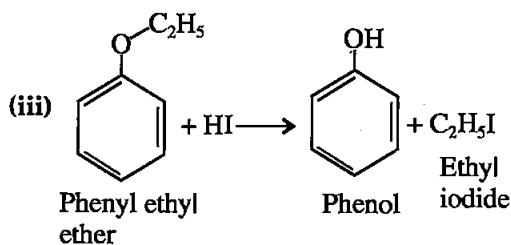
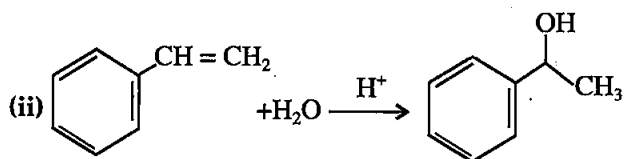
19. Write the structures of the main products in the following reactions : [3]



Answer :

(i) Sodium borohydride doesn't reduce esters, so product would be,





20. (a) Why is bithional added to soap ? [3]
 (b) What is tincture of iodine ? Write its one use.
 (c) Among the following, which one acts as a food preservative ?
 Aspartame, Aspirin, Sodium Benzoate, Paracetamol

Answer :

- (a) Bithional is added to soaps to impart antiseptic properties to soap.
 (b) Tincture of iodine is 2-3 percent mixture of iodine in alcohol water mixture. It is used as an antiseptic.
 (c) Sodium benzoate is used as a food preservative.
21. Define the following with an example of each : [3]

- (a) Polysaccharides
 (b) Denatured protein
 (c) Essential amino acids

OR

- (a) Write the product when D-glucose reacts with conc. HNO_3 .
 (b) Amino acids show amphoteric behaviour. Why ?
 (c) Write one difference between α -helix and β -pleated structures of proteins.

Answer :

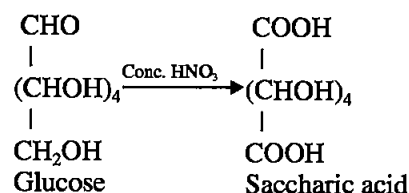
- (a) **Polysaccharides** : Polysaccharides are food storage materials and most commonly

found carbohydrates in nature. These are the compound which are formed of large number of monosaccharide units joined together by glycosidic linkages. Example. Starch, main storage polysaccharide of plants.

- (b) **Denatured protein** : Proteins have an unique three dimensional structure in their native form. If the native form of protein is subjected to any physical change (such as temperature change) or any chemical change (such as change in pH), the hydrogen bonds are disturbed. Due to this, globules unfold and helix get uncoiled due to which protein loses its biological activity. This is called denaturation of protein. During denaturation 2° and 3° structures of proteins are destroyed but 1° structure remains intact. Coagulation of egg white is an example of denaturation of protein.
- (c) **Essential amino acids** : The amino acids which are not synthesized in our body and have to be obtained through diet are known as essential amino acids. Example : Tryptophan

OR

- (a) D-Glucose gets oxidized to give saccharic acid, a dicarboxylic acid on reacting with nitric acid.



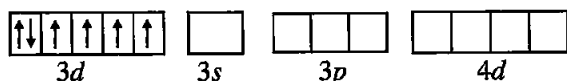
- (b) Amino acids show amphoteric behaviour due to the presence of both acidic (carboxylic group) and basic (amino group) in the same molecule. So, in basic medium the carboxyl group can lose a proton and in acidic medium amino group can accept a proton.
- (c) In α -helix structure the polypeptide chain forms all possible hydrogen bonds by twisting into a right handed screw (helix) with the $-\text{NH}$ group of each amino acid residue gets hydrogen bonded to the $-\text{C}=\text{O}$ of an adjacent turn of the helix (intra.molecular bonding), whereas in

β -structure all peptide chains are stretched out to nearly maximum extension and then laid side by side which are held together by intermolecular hydrogen bonds (intermolecular bonding).

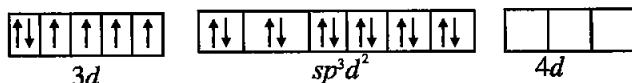
22. (a) Write the formula of the following coordination compound :
Iron (III) hexacyanoferrate (II)
- (b) What type of isomerism is exhibited by the complex $[\text{Co}(\text{NH}_3)_5\text{Cl}]\text{SO}_4$?
- (c) Write the hybridisation and number of unpaired electrons in the complex $[\text{CoF}_6]^{3-}$. (Atomic number of Co = 27) [3]

Answer :

- (a) Molecular formula of Iron(III) α -cyanoferrate(II) is $\text{Fe}_4[\text{Fe}(\text{CN})_6]_3$
- (b) $[\text{Co}(\text{NH}_3)_5\text{Cl}]\text{SO}_4$ will show Ionisation isomerism and the possible isomers are $[\text{Co}(\text{NH}_3)_5\text{Cl}]\text{SO}_4$ and $[\text{Co}(\text{NH}_3)_5\text{SO}_4]\text{Cl}$
- (c) Electronic configuration of Co^{3+} ion is,



Electronic configuration of sp^3d^2 hybridized (as F^- is a weak field ligand) orbitals of Co^{3+} , with six pairs of electrons from six F^- ions.



There are 4 unpaired electrons in $[\text{CoF}_6]^{3-}$.

23. Shyam went to a grocery shop to purchase some food items. The shopkeeper packed all the items in polythene bags and gave them to Shyam. But Shyam refused to accept the polythene bags and asked the shopkeeper to pack the items in paper bags. He informed the shopkeeper about the heavy penalty imposed by the government for using polythene bags. The shopkeeper promised that he would use paper bags in future in place of polythene bags. [4]

Answer the following :

- (a) Write the values (at least two) shown by Shyam**.
- (b) Write one structural difference between low-density polythene and high-density polythene.
- (c) Why did Shyam refuse to accept the items in polythene bags ?

**Answer is not given due to the change in present syllabus.

- (d) What is a biodegradable polymer ? Give an example.

Answer :

- (b) Low density polythene has branched chain structure, whereas the high density polythene has linear chain structure.
- (c) Shyam refused to take the items in polythene bags as polythene is non-biodegradable neither recyclable,
- (d) Biodegradable polymers contain functional groups similar to functional groups present in biopolymers, so they get degraded in environment by certain microorganisms and thus are environment friendly. For example : Poly β -hydroxybutyrate-co- β -hydroxyvalerate (PHBV).

24. (a) Give reasons : [5]

- (i) H_3PO_3 undergoes disproportionation reaction but H_3PO_4 does not.
- (ii) When Cl_2 reacts with excess of F_2 , ClF_3 is formed and not FCl_3 .
- (iii) Dioxygen is a gas while Sulphur is a solid at room temperature.

- (b) Draw the structures of the following :

- (i) XeF_4
(ii) HClO_3

OR

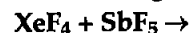
- (a) When concentrated sulphuric acid was added to an unknown salt present in a test tube a brown gas (A) was evolved. This gas intensified when copper turnings were added to this test tube. On cooling, the gas (A) changed into a colourless solid (B).

- (i) Identify (A) and (B).
(ii) Write the structures of (A) and (B).
(iii) Why does gas (A) change to solid on cooling ?

- (b) Arrange the following in the decreasing order of their reducing character :



- (c) Complete the following reaction :



Answer :

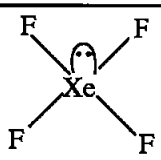
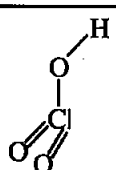
- (a) (i) In H_3PO_3 (orthophosphorus acid) oxidation state of phosphorus is +3 and it contains one P-H bond in addition to P=O and P-OH bonds. These type of oxoacids tend to undergo disproportionation to give orthophosphoric acid (P has +5 state) and phosphine (P has +3 state). Whereas in H_3PO_4 (orthophosphoric

acid), Phosphorus is in +5 state hence no disproportionation takes place in H_3PO_4 .

(ii) When Cl_2 reacts with excess of F_2 , ClF_3 is formed and not $FeCl_3$ because Fluorine can't expand its valency and can show only -1 oxidation state, whereas Cl can expand its valency due to the availability of *d*-orbitals.

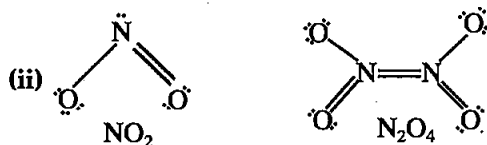
(iii) Dioxygen is a gas while sulphur is a solid at room temperature this is because sulphur have S_8 molecules and these are packed to give different crystal structure, whereas dioxygen is a diatomic molecule (O_2) and it does not have enough intermolecular attraction and thus exists in gaseous form.

(b)

(i) XeF_4 is square planar in structure	(ii) $HClO_3$ or chloric acid
	

OR

(a) (i) The brown gas A is NO_2 or nitrogen dioxide. On cooling it dimerises to N_2O_4 and solidifies as a colourless solid.

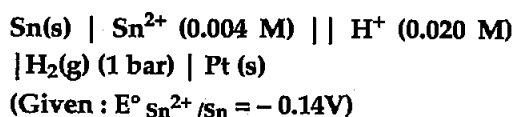


(iii) Compound A, that is, NO_2 contains odd number of valence electrons. It behaves as a typical odd molecule. On dimerization, it is converted to stable N_2O_4 molecule with even number of electrons (thus colourless) and have better intermolecular forces to get solidified. Thus, it changes to solid on cooling.

(b) Decreasing order of reducing character-
 $HI > HBr > HCl > HF$

(c) $XeF_4 + SbF_5 \rightarrow [XeF_3]^+ + [SbF_6]^-$

25. (a) Write the cell reaction and calculate the e.m.f. of the following cell at 298 K : [5]



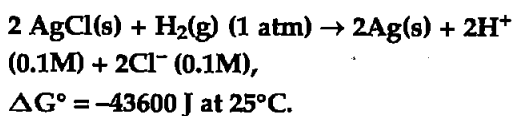
(b) Give reasons :

(i) On the basis of E° values, O_2 gas should be liberated at anode but it is Cl_2 gas which is liberated in the electrolysis of aqueous $NaCl$.

(ii) Conductivity of CH_3COOH decreases on dilution.

OR

(a) For the reaction



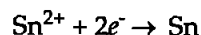
Calculate the e.m.f. of the cell.

$$[\log 10^{-n} = -n]$$

(b) Define fuel cell and write its two advantages.

Answer :

(a) The half cell reactions can be written as;

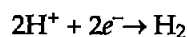


$$E_{cell} = -0.14 + \frac{0.0591}{2} (\log [Sn^{2+}])$$

$$= -0.11 \times (\log 0.004) V$$

$$= 0.26 V$$

.....(i)



$$E_{cell} = 0.0 + 0.0591 (\log [H^+])$$

$$= 0.0591 \times (-1.7)$$

$$= -0.10V$$

.....(ii)

Considering,

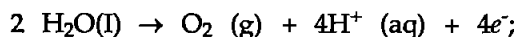
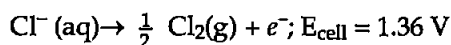
$2H^+(aq) + Sn(s) \rightarrow Sn^{2+}(aq) + H_2(g)$, as the cell reaction

So, E_{cell} will be,

$$E_{cell} = 0.26 V - (-0.10) V$$

$$= 0.36 V$$

(b) (i) During the electrolysis of aqueous $NaCl$, there are two possible reactions at anode,



$$E_{cell} = 1.23 V$$

The reaction at anode with lower value of E_{cell} is preferred and therefore, water

should get oxidized to give O_2 but on account of over potential of oxygen, Cl^- gets oxidized preferably, liberating Cl_2 gas.

(ii) Conductivity of CH_3COOH decreases on dilution because the number of ions per unit volume that carry the current in a solution decreases on dilution.

OR

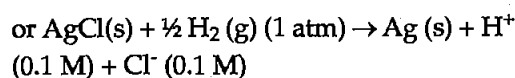
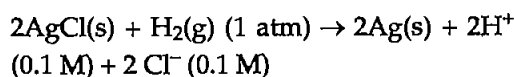
(a) E°_{cell} can be obtained from the formula,
 $\Delta G^\circ = -nE^\circ_{cell}$

$$E^\circ_{cell} = \frac{\Delta G^\circ}{nF}$$

$$= \frac{-43600 J}{1 \times 96487 C mol^{-1}}$$

$$= -0.45 V$$

Now, let us consider the given reaction equation,



According to Nernst equation :

$$E_{cell} = E^\circ_{cell} - \frac{2.303 RT}{nF} \log \frac{[product]}{[reactant]}$$

$$E_{cell} = E^\circ_{cell} - \frac{2.303 RT}{nF} \log \frac{[H^+][Cl^-][Ag]}{[AgCl][H_2]^{1/2}}$$

As the activity of solid and H_2 gas at 1 atm is taken unity, the equation becomes,

$$E_{cell} = E^\circ_{cell} - \frac{2.303 RT}{nF} \log ([H^+][Cl^-]) \dots\dots(i)$$

Now, putting the values in equation (i) above,

$$E_{cell} = -0.45 - (0.059) \log (0.1 \times 0.1)$$

$$= -0.51 \log (10^{-2})$$

$$= -0.51 \times (-2)$$

$$= 1.02 V$$

So, EMF of the given cell is 1.02 V

(b) Galvanic cells that are designed to convert the energy of combustion of fuels like hydrogen, methane, methanol etc. directly

into electrical energy are called fuel cells.

Advantages of fuel cells are :

1. Fuel cells produce electricity with an efficiency of about 70% compared to thermal plants whose efficiency is about 40%.
2. Fuel cells are pollution free.

26. (a) Write the reactions involved in the following : [5]

(i) Hofmann bromamide degradation reaction

(ii) Diazotisation

(iii) Gabriel phthalimide synthesis

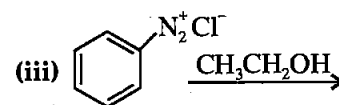
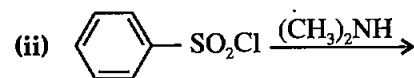
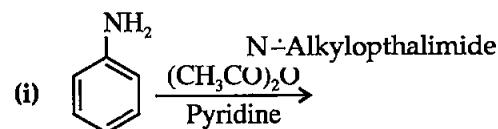
(b) Give reasons :

(i) $(CH_3)_2NH$ is more basic than $(CH_3)_3N$ in an aqueous solution.

(ii) Aromatic diazonium salts are more stable than aliphatic diazonium salts.

OR

(a) Write the structures of the main products of the following reactions :



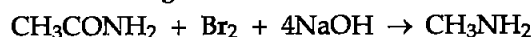
(b) Give a simple chemical test to distinguish between Aniline and N, N-dimethylaniline.

(c) Arrange the following in the increasing order of their pK_b values :



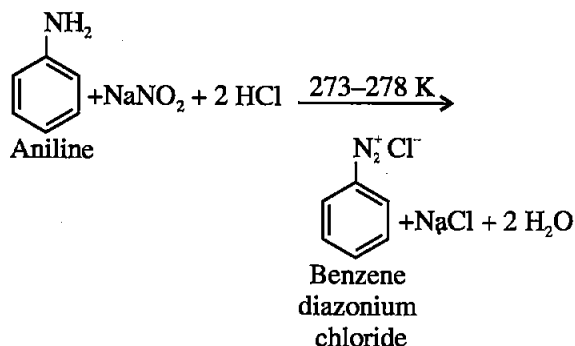
Answer :

(a) (i) Hofmann bromamide degradation reaction : Acetamide can be considered for example. In this reaction, Acetamide (CH_3CONH_2) undergoes Hofmann degradation in presence of Bromine and NaOH to give Methanamine.

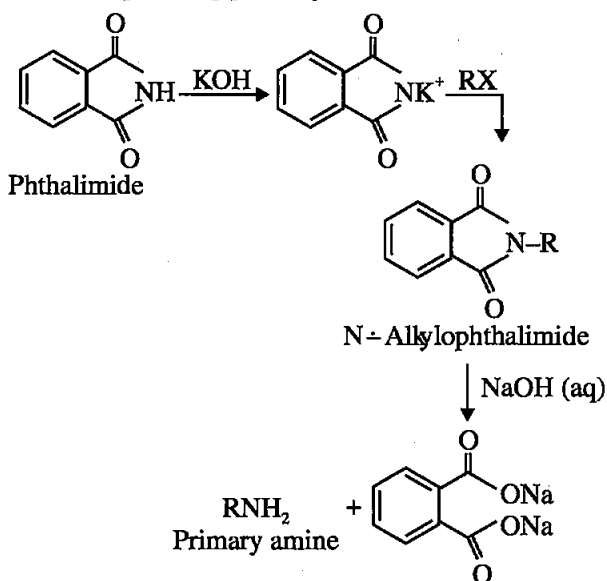




(ii) **Diazotisation** : The conversion of primary aromatic amines into diazonium salts is known as diazotisation.

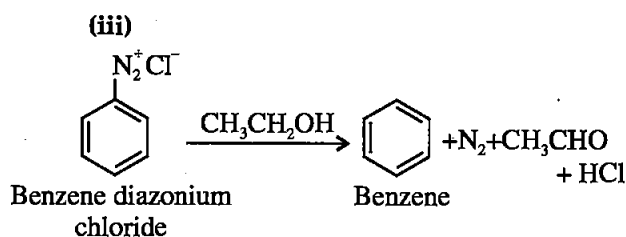
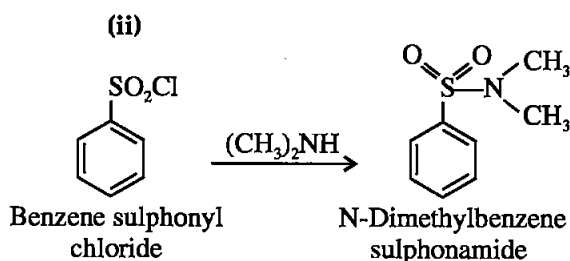
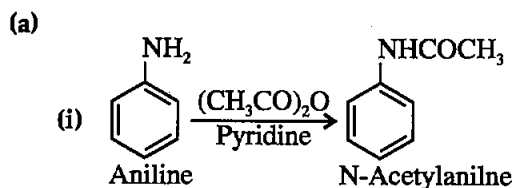


(iii) **Gabriel phthalimide synthesis** : This reaction is used for the preparation of primary amines. Phthalimide on treatment with ethanolic potassium hydroxide forms potassium salt of phthalimide which on heating with alkyl halide followed by alkaline hydrolysis produces the corresponding primary amine.

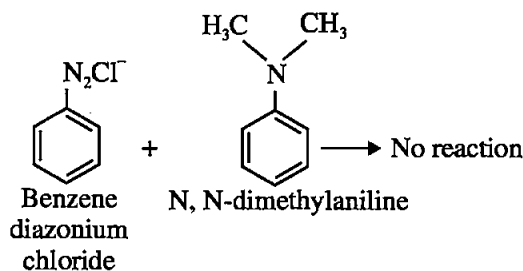
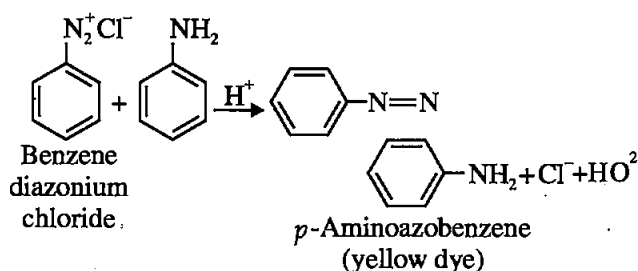


(b) (i) $(\text{CH}_3)_2\text{NH}$ is more basic than $(\text{CH}_3)_3\text{N}$ in aqueous solutions because, in $(\text{CH}_3)_3\text{N}$ the lone pair of electrons on nitrogen atom is responsible for its basicity are quite hindered by the three methyl groups, hence are less available. Due to which it is less basic as compared to $(\text{CH}_3)_2\text{NH}$.
 (ii) Aromatic diazonium salts are more stable than aliphatic diazonium salts because the positive charge on nitrogen atom is stabilized by the resonance with attached phenyl group.

OR



(b) Aniline can be distinguished from N, N-dimethyl aniline by diazo coupling reaction. Aniline would react with benzene diazonium chloride to give a yellow dye, whereas N, N-dimethyl aniline won't undergo this reaction.



(c) Increasing order of pK_b values is



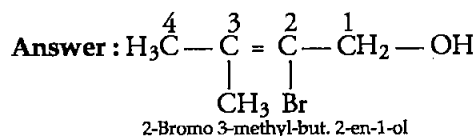
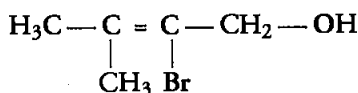
Chemistry 2017 (Outside Delhi)

SET I

Time allowed : 3 hours

Maximum marks : 70

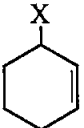
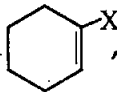
- Write the formula of the compound of phosphorus which is obtained when conc. HNO_3 oxidises P_4 ** [1]
- Write the IUPAC name of the following compound : [1]

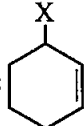


- What is the effect of adding a catalyst on [1]
 - Activation energy (E_a), and
 - Gibbs energy (ΔG) of a reaction ?

Answer : On adding a catalyst

- Activation energy of the reaction decreases.
- Gibbs energy doesn't change.

- Out of  and , which is an example of allylic halide ? [1]

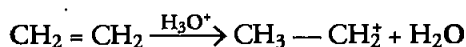
Answer :  is an example of allylic halide

- What type of colloid is formed when a liquid is dispersed in a solid ? Give an example. [1]

Answer : When a liquid is dispersed in solid, 'gel' colloid is formed. Examples Jelly, butter, cheese, curd etc.

- (a) Arrange the following compounds in the increasing order of their acid strength : [2]
p-cresol, *p*-nitrophenol, phenol

(b) Write the mechanism (using curved arrow notation) of the following reaction :

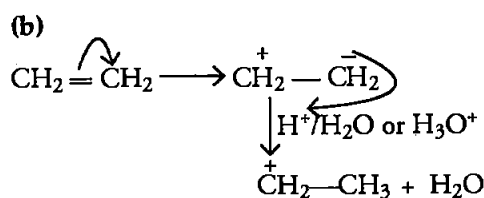
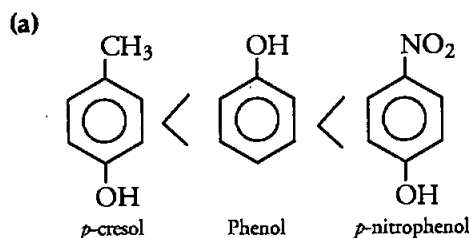


OR

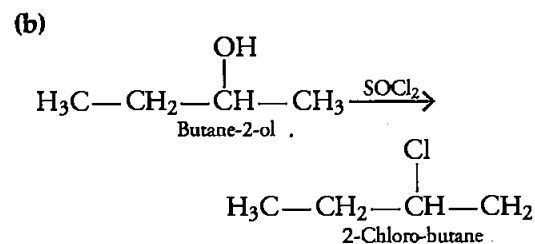
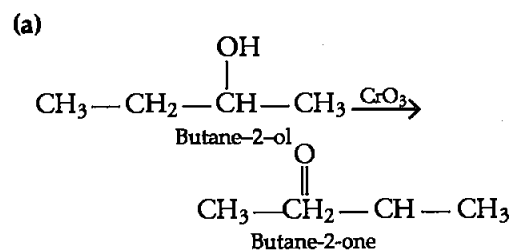
Write the structures of the products when Butan-2-ol reacts with the following :

- CrO_3
- SOCl_2

Answer :



OR



- Calculate the number of unit cells in 8.1g of aluminium if it crystallises in a face-centred cubic (f.c.c.) structure. (Atomic mass of Al = 27 g mol^{-1})** [2]

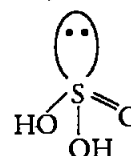
- Draw the structures of the following :

(a) H_2SO_3

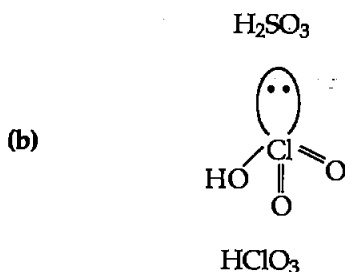
(b) HClO_3

[2]

Answer : (a)

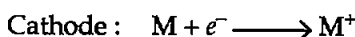


**Answer is not given due to the change in present syllabus.



9. Write the name of the cell which is generally used in hearing aids. Write the reactions taking place at the anode and the cathode of this cell. [2]

Answer : Electrolytic cells are generally used in hearing aids. At cathode, reduction of metal takes place and at anode, oxidation of metal takes place.

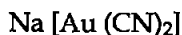


10. Using IUPAC norms write the formulae for the following :

(a) Sodium dicyanoaurate (I)

(b) Tetraamminechloridonitrito-N-platinum (IV) sulphate [2]

Answer : (a) Sodium dicyanoaurate (I)



(b) Tetraammine chloridonitrito-N-platinum (IV) Sulphate $[\text{Pt} (\text{NH}_3)_4(\text{Cl}) (\text{NO}_2)]\text{SO}_4$

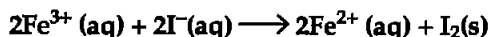
11. (a) Based on the nature of intermolecular forces, classify the following solids : **

Silicon carbide, Argon

(b) ZnO turns yellow on heating. Why ?**

(c) What is meant by groups 12-16 compounds ? Give an example.** [3]

12. (a) The cell in which the following reaction occurs :



has $E_{\text{cell}}^{\circ} = 0.236 \text{ V}$ at 298 K. Calculate the standard Gibbs energy of the cell reaction. (Given : $1\text{F} = 96,500 \text{ C mol}^{-1}$)

(b) How many electrons flow through a metallic wire if a current of 0.5 A is passed for 2 hours ? (Given : $1\text{F} = 96,500 \text{ C mol}^{-1}$) [3]

Answer : (a) $\Delta G^{\circ} = -nF E_{\text{cell}}^{\circ}$
 $= -2 \times 96500 \times 0.236$
 $= -45.548 \text{ kJ/mol}$

**Answer is not given due to the change in present syllabus.

(b) According to Faraday's first law the amount of metal deposited (W).

$$\begin{aligned}
 W &= i \times t \\
 &= 0.5 \times 7200 \\
 &= 3600\text{C}
 \end{aligned}$$

$$\therefore 1\text{F} = 96500 \text{ C mol}^{-1}$$

That is e^- flows from $96500 \text{ C} = 1 \text{ mol}$

$$\therefore e^- \text{ flows from } 3600 \text{ C} = \frac{1 \times 3600}{96500 \text{ mol}} = 0.037 \text{ mol.}$$

$$\begin{aligned}
 \text{No. of electrons} &= 0.037 \times 6.023 \times 10^{23} \\
 &= 0.2246 \times 10^{23} \\
 &= 22.46 \times 10^{21} \text{ electrons}
 \end{aligned}$$

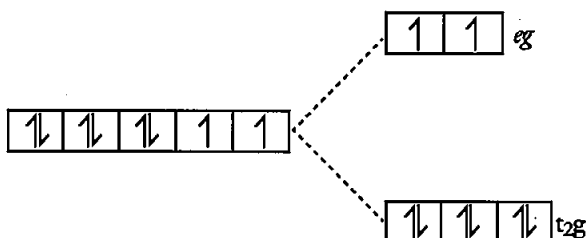
13. (a) What type of isomerism is shown by the complex $[\text{Co}(\text{NH}_3)_5 (\text{SCN})]^{2+}$?

(b) Why is $[\text{NiCl}_4]^{2-}$ paramagnetic while $[\text{Ni}(\text{CN})_4]^{2-}$ is diamagnetic ? (Atomic number of Ni = 28)

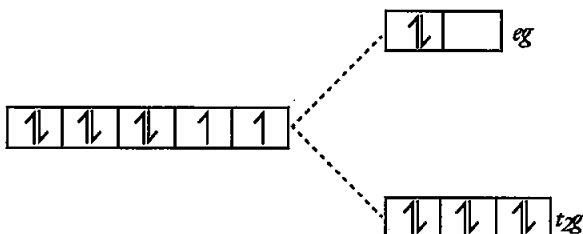
(c) Why are low spin tetrahedral complexes rarely observed ? [3]

Answer : (a) Linkage isomerism

(b) $[\text{NiCl}_4]^{2-}$, $\text{Ni}^{2+} = 1s^2 2s^2 2p^6 3s^2 3p^6 3d^8$
 Cl^- is a weak field ligand.



2 electrons are unpaired in $[\text{NiCl}_4]^{2-}$ which provides paramagnetism to the complex. $[\text{Ni}(\text{CN})_4]^{2-}$
 $\text{Ni}^{2+} = 1s^2 2s^2 2p^6 3s^2 3p^6 3d^8$
 CN^- is a strong field ligand



no electron is unpaired in $[\text{Ni}(\text{CN})_4]^{2-}$ That's why the complex is diamagnetic.

(c) In tetrahedral complex, CFSE is very low and it is difficult for the tetrahedral complexes to exceed the pairing energy. Usually electrons prefer to move to higher energy orbitals for pairing. Thus they usually forms high spin complexes.

$$(\text{CFSE})_{\text{tetrahedral}} = \frac{4}{9} (\text{CFSE})_{\text{octahedral}}$$

14. Write one difference in each of the following :

- Multimolecular colloid and Associated colloid
- Coagulation and Peptization
- Homogeneous catalysis and Heterogeneous catalysis [3]

OR

- Write the dispersed phase and dispersion medium of milk.
- Write one similarity between physisorption and chemisorption.
- Write the chemical method by which $\text{Fe}(\text{OH})_3$ sol is prepared from FeCl_3 .

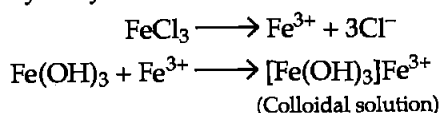
Answer :

- Multimolecular colloids are the colloids in which the dispersed phase consists of aggregates of atoms or molecules with molecular size less than 1nm whereas associated colloids are the substances that are dissolved in a medium, behave as normal electrolytes at low concentration but as colloids at higher concentration.
- Coagulation is the process of precipitation of a colloidal solution by the addition of excess of an electrolyte whereas peptization is the process responsible for the formation of stable dispersion of colloidal particles in dispersion medium.
- Homogeneous catalysis is the one in which the phases of the reactants and the catalysts are the same whereas in heterogeneous catalysis the phases of the reactants and the catalysts are not the same.

OR

- Milk
Dispersed phase — Liquid
Dispersion medium— Liquid
- Both physisorption and chemisorption depends on the surface area. Both increases with an increase in the surface area.

(c) $\text{Fe}(\text{OH})_3$ sol is prepared from FeCl_3 by hydrolysis method.



15. A first order reaction takes 20 minutes for 25% decomposition. Calculate the time when 75% of the reaction will be completed.

Given : $\log 2 = 0.3010$, $\log 3 = 0.4771$, $\log 4 = 0.6021$ [3]

Answer : For first order reaction.

$$K = \frac{2.303}{t} \log \frac{a}{a-x}$$

$a \rightarrow$ initial amount

$a-x \rightarrow$ amount left after time

for 25% decomposition :

$$K = \frac{2.303}{20} \log \frac{100}{75} \dots\dots(1)$$

for 75% decomposition :

$$K = \frac{2.303}{t} \log \frac{100}{25} \dots\dots(2)$$

K is constant throughout the process eq. (1) = eq. (2)

Thus on comparing eq. (1) and eq. (2) we have

$$\begin{aligned} \frac{2.303}{20} \log \frac{100}{75} &= \frac{2.303}{t} \log \frac{100}{25} \\ \frac{1}{20} (\log 100 - \log 75) &= \frac{1}{t} (\log 100 - \log 25) \\ \frac{1}{2} [2 - 1.875] &= \frac{1}{t} [2 - 1.398] \\ \frac{0.125}{2} &= \frac{0.602}{t} \\ t &= \frac{1.204}{0.125} \\ t &= 9.632 \text{ minutes} \end{aligned}$$

16. The following compounds are given to you :

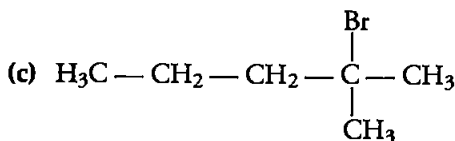
2-Bromopentane, 2-Bromo-2-methylbutane,
1-Bromopentane

- Write the compound which is most reactive towards $\text{S}_{\text{N}}2$ reaction.
- Write the compound which is optically active.
- Write the compound which is most reactive towards β -elimination reaction. [3]

Answer :

- 1-bromopentane > 2-bromopentane > 2-bromo-2-methylpentane (Reactivity towards, $\text{S}_{\text{N}}2$ reaction)

(b) 2-bromopentane



2-bromo-2-methylpentane

This compound is most reactive towards β -elimination.

17. Write the principle of the following :

(a) Zone refining

(b) Froth floatation process

(c) Chromatography

[3]

Answer :

(a) Zone refining

1. This process is used for the metals which are required in very high purity like silicon, germanium, boron, gallium etc.

2. This method is based on the principle that the impurities are more soluble in the melt than in the solid state of the metal.

3. In this method, impure metal is casted into a thin bar.

(b) Froth floatation process

1. This method is based on the principle that difference in the wetting properties of the ore and gangue particles with water and oil.

2. This method is used for the extraction of those metals in which the ore particles are preferentially wetted by oil and gangue by water.

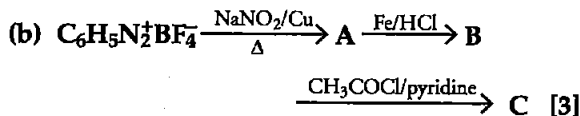
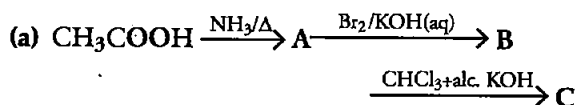
3. This method has been used for the concentration of sulphide ores like PbS, ZnS, CuFeS₂ etc.

(c) Chromatography

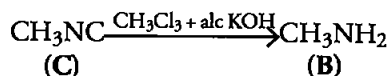
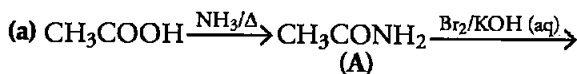
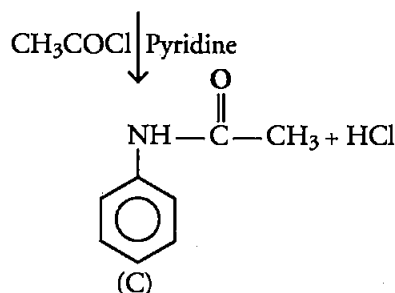
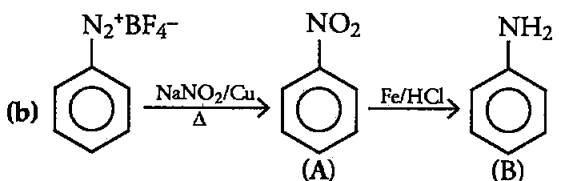
1. This is a modern method of purification based on the difference in the adsorbing capacities of the metal and its impurities on a suitable adsorbent.

2. This technique is based on the principle that different components of a mixture are differently adsorbed on an adsorbent.

18. Write the structures of compounds A, B and C in the following reactions :



Answer :

(A) CH₃CONH₂ → Acetamide(B) CH₃NH₂ → Methylamine(C) CH₃NC—Methylisocyanide(A) Nitrobenzene — C₆H₅NO₂(B) Aniline — C₆H₅NH₂(C) Acetanilide — C₆H₅NHCOCH₃

19. Write the structures of the monomers used for getting the following polymers :

(a) Nylon-6,6

(b) Melamine-formaldehyde polymer

(c) Buna-S

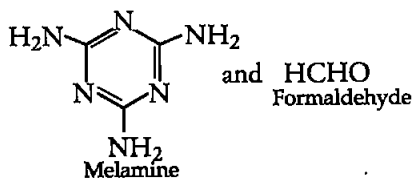
[3]

Answer :

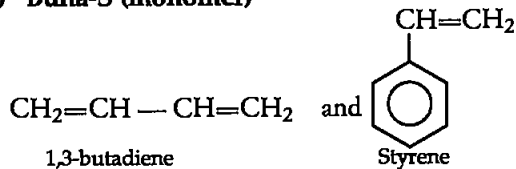
(a) Monomers of Nylon-6,6



(b) Monomers of Melamine-formaldehyde polymer



(c) Buna-S (monomer)

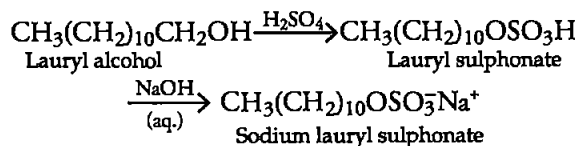


20. Define the following : [3]

- (a) Anionic detergents
 (b) Limited spectrum antibiotics
 (c) Antiseptics

Answer :

(a) **Anionic detergents** : These detergents contain anionic hydrophilic group. These are manufactured from long chain of alcohols. These long chain alcohols are treated with conc. H_2SO_4 to form alkyl hydrogen sulphates of high molecular mass and then are neutralized with alkali to form salts.



- (b) **Limited Spectrum Antibiotics** : The antibiotics which are effective against single organism or disease are called limited spectrum antibiotics, example—streptomycin.
- (c) **Antiseptics** : The chemical substances that are used to either kill or prevent the growth of micro-organisms are called antiseptics. These are not harmful to living tissues and can be safely applied on wounds, cuts, ulcers etc., example Soframycin.

21. Give reasons for the following :

- (a) Red phosphorus is less reactive than white phosphorus.**
 (b) Electron gain enthalpies of halogens are largely negative.
 (c) N_2O_5 is more acidic than N_2O_3 .** [3]

Answer :

- (b) Electron gain enthalpies of halogens are largely negative in their respective periods.

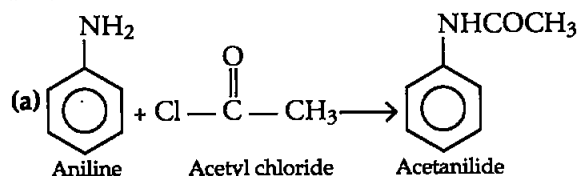
**Answer is not given due to the change in present syllabus.

This is due to the fact that the atoms of these elements have only one electron less than the stable noble gas ($ns^2 np^6$) configuration. Therefore, they have maximum tendency to accept an additional electron.

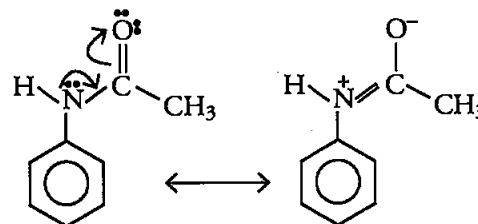
22. Give reasons for the following :

- (a) Acetylation of aniline reduces its activation effect.
 (b) CH_3NH_2 is more basic than $\text{C}_6\text{H}_5\text{NH}_2$.
 (c) Although $-\text{NH}_2$ is *o/p* directing group, yet aniline on nitration gives a significant amount of *m*-nitroaniline. [3]

Answer :

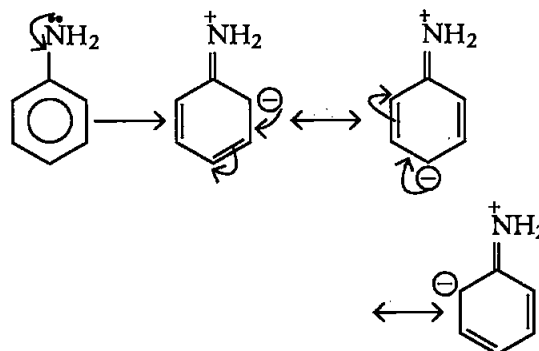


In acetanilide, the oxygen atom of the group withdraws electrons from NH_2 group as shown below :

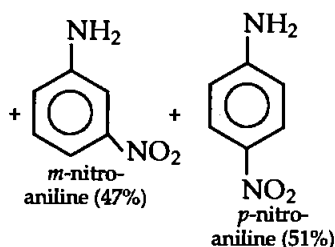
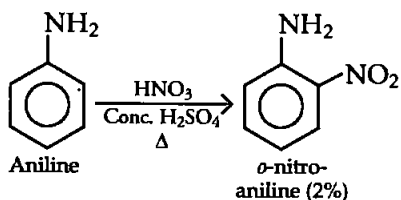


As a result, the electron pair on nitrogen gets displaced to the carboxyl group. Therefore, the unshared pair of electron on nitrogen is less available for donation of the electron to aromatic ring.

- (b) In aniline, lone pair of e^- present on 'N' is in conjugation with the benzene ring and become less available for protonation because of resonance.



This conjugation of lone pair of e^- is not present in case of methyl amine and lone pair of e^- of 'N' are fully available for protonation. That's why the basicity order of aniline and methyl amine is :



The reason for the formation of large amount of *m*-nitroaniline is that under strongly acidic conditions, aniline gets protonated to anilinium ion ($-\text{NH}_3^+$ group). This is a deactivating group and is meta-directing in nature.

23. After watching a programme on TV about the presence of carcinogens (cancer causing agents) Potassium bromate and potassium iodate in bread and other bakery products, Rupali a Class XII student decided to make others aware about the adverse effects of these carcinogens in foods. She consulted the school principal and requested him to instruct the canteen contractor to stop selling sandwiches, pizzas, burgers and other bakery products to the students. The principal took an immediate action and instructed the canteen contractor to replace the bakery products with some protein and vitamin rich food like fruits, salads, sprouts, etc. The decision was welcomed by the parents and the students.

After reading the above passage, answer the following questions :

- (a) What are the values (at least two) displayed by Rupali ?**

**Answer is not given due to the change in present Syllabus.

- (b) Which polysaccharide component of carbohydrates is commonly present in bread ?
 (c) Write the two types of secondary structures of proteins.
 (d) Give two examples of water soluble vitamins. [4]

Answer :

- (b) Starch
 (c) 1. α -helix structure.
 2. β -pleated sheet structure.
 (d) Vitamin B and Vitamin C

24. (a) Account for the following :

- (i) Transition metals show variable oxidation states.
 (ii) Zn, Cd and Hg are soft metals.
 (iii) E° value for the $\text{Mn}^{3+}/\text{Mn}^{2+}$ couple is highly positive (+1.57 V) as compared to $\text{Cr}^{3+}/\text{Cr}^{2+}$.
 (b) Write one similarity and one difference between the chemistry of lanthanoid and actinoid elements. [5]

OR

- (a) Following are the transition metal ions of 3d series :



(Atomic numbers : Ti = 22, V = 23, Mn = 25, Cr = 24)

Answer the following :

- (i) Which ion is most stable in an aqueous solution and why ?
 (ii) Which ion is a strong oxidising agent and why ?
 (iii) Which ion is colourless and why ?
 (b) Complete the following equation :
 (i) $2\text{MnO}_4^- + 16\text{H}^+ + 5\text{S}^{2-} \longrightarrow$
 (ii) $\text{KMnO}_4 \xrightarrow{\text{Heat}}$

Answer

- (a) (i) Transition metal ions shows variable oxidation states due to the participation of (n-1) d electrons in addition to outer ns-electrons because the energies of ns and (n-1)d subshells

are almost equal. As a result of which the electrons of $(n-1)d$ and ns subshell both part in bond formation.

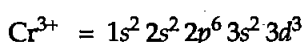
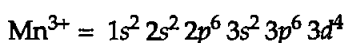
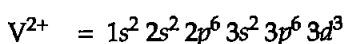
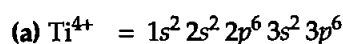
(ii) Zn, Cd and Hg are soft metals because of their completely filled $3d$, $4d$ and $5d$ orbitals respectively. Due to completely filled d -orbitals these metals are reluctant to form Zn-Zn, Cd-Cd and Hg-Hg bonds.

(iii) Highly positive value of E° for Mn^{3+}/Mn^{2+} shows that Mn^{2+} (d^5) is particularly stable. While low value of E° for Cr^{3+}/Cr^{2+} shows that Cr^{2+} (d^4) is less stable than Cr^{3+} (d^3)

(b) **Similarity** : In lanthanoids and actinoids both the added electron enters the antipenultimate shell $4f$ and $5f$ respectively.

Difference : Lanthanoids show a common oxidation state of +3 while actinoids show different oxidation states other than +3.

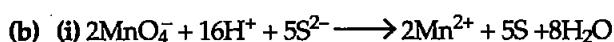
OR



(i) Ti^{4+} is most stable in an aqueous solution because of full filled valence shell ($3s^2 3p^6$) onfiguration (noble gas configuration).

(ii) Mn^{3+} is the strong agent as it oxidises other species it will reduce itself by taking an electron and will stabilise its configuration to $3d^5$.

(iii) Ti^{4+} is colourless due to absence of unpaired electrons ($3s^2 3p^6$)



25. (a) A 10% solution (by mass) of sucrose in water has a freezing point of 269.15 K. Calculate the freezing point of 10% glucose in water if the freezing point of pure water is 273.15 K.

Given :

$$\text{Molar mass of sucrose} = 342 \text{ g mol}^{-1}$$

$$\text{Molar mass of glucose} = 180 \text{ g mol}^{-1}$$

(b) Define the following terms :

(i) Molality (m)

(ii) Abnormal molar mass [5]

OR

(a) 30 g of urea ($M=60 \text{ g mol}^{-1}$) is dissolved in 846 g of water. Calculate the vapour pressure of water for this solution if vapour pressure of pure water at 298 K is 23.8 mm Hg.

(b) Write two differences between ideal solutions and non-ideal solutions.

Answer :

$$(a) T_o \text{ (freezing point of water)} = 273.15K$$

$$T_s \text{ (freezing point of sucrose solution)} = 269.15K$$

$$\text{Weight of sucrose in solution} = 10 \text{ g}$$

$$\text{Weight of glucose in solution} = 10 \text{ g}$$

$$\text{Molar mass of sucrose} = 342 \text{ g mol}^{-1}$$

$$\text{Molar mass of glucose} = 180 \text{ g mol}^{-1}$$

$$\text{Freezing point of glucose} = x$$

Depression in freezing point

$$\Delta T_f = \frac{K_f \times W_B \times 1000}{W_A \times 1000}$$

$$K_f = \frac{\Delta T_f \times W_A \times M_B}{W_B \times 1000}$$

In case of sucrose solution

$$K_f = \frac{(273.15 - 269.15) \times 90 \times 342}{10 \times 1000} \dots (1)$$

In case of glucose solution

$$K_f = \frac{(273.15 - x) \times 90 \times 180}{10 \times 1000} \dots (2)$$

$\therefore K_f$ is constant

thus equation (1) = equation (2)

$$\frac{(273.15 - 269.15) \times 90 \times 342}{10 \times 1000} = \frac{273.15 - x \times 90 \times 180}{10 \times 1000}$$

$$4 \times 342 = (273.15 - x) \times 180$$

$$(273.15 - x) = \frac{40 \times 342}{180} = 7.6$$

$$x = 265.55 \text{ K}$$

So, freezing point of glucose solution = 265.55 K.

(b) (i) **Molality** : It is the number of moles of the solute dissolved per 1000 g of the solvent. It is denoted by *m*.

$$\text{Molality} = \frac{\text{Moles of solute}}{\text{Mass of solvent (in gram)}} \times 1000$$

(ii) **Abnormal molar mass** : Those solute that dissociate or associate in solution, show abnormal molar mass in solution.

for example, Molar mass of ethanoic acid is greater than normal molar mass.



Molar mass of KCl in solution is reduced than normal molar mass.



OR

$$(a) W_B = 30 \text{ g} \quad M_B = 60 \text{ g mol}^{-1}$$

$$W_A = 846 \text{ g} \quad M_A = 18 \text{ g mol}^{-1}$$

$$P^\circ = 23.8 \text{ mm Hg}$$

$$P_s = x$$

Relative lowering of vapour pressure

$$\frac{P^\circ - P_s}{P^\circ} = \frac{W_B \times M_A}{M_B \times W_A}$$

$$\frac{23.8 - x}{23.8} = \frac{30 \times 18}{60 \times 846}$$

$$23.8 - x = \frac{23.8}{94}$$

$$23.8 - x = 0.253$$

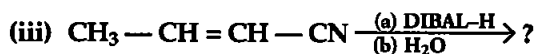
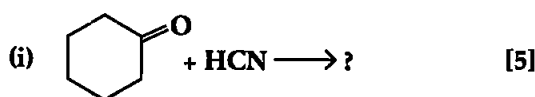
$$x = 23.8 - 0.253 = 23.547$$

So, vapour pressure of water for this solution = 23.597 mmHg

(b)

	Ideal Solutions	Non-ideal Solutions
1.	The interactions between the components are similar to those in the pure components.	The interactions between the components are different from those of the pure components.
2.	There is no enthalpy change on mixing $\Delta H_{\text{mix}} = 0$	There is enthalpy change on mixing $\Delta H_{\text{mix}} \neq 0$

26. (a) Write the product(s) in the following reactions :



(b) Give simple chemical tests to distinguish between the following pairs of compounds :

- (i) Butanal and Butan-2-one
- (ii) Benzoic acid and Phenol

OR

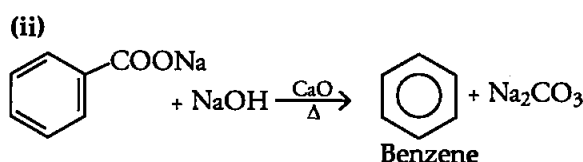
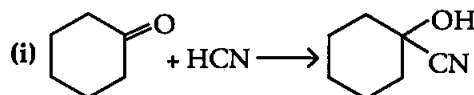
(a) Write the reactions involved in the following :

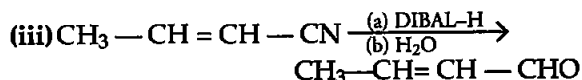
- (i) Etard reaction
- (ii) Stephen reduction

(b) How will you convert the following in not more than two steps :

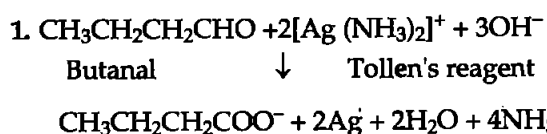
- (i) Benzoic acid to Benzaldehyde
- (ii) Acetophenone to Benzoic acid
- (iii) Ethanoic acid to 2-Hydroxyethanoic acid

Answer : (a)

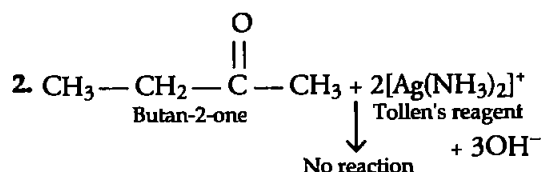




(b) (i) Butanal and Butan-2-one

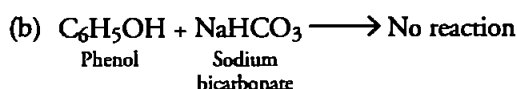
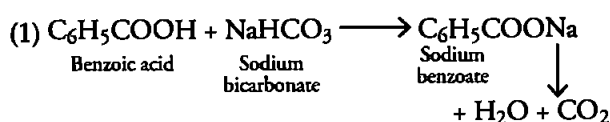


This reaction is known as silver mirror test—



Thus Butanal gives silver mirror test with Tollen's reagent whereas Butan-2-one does not.

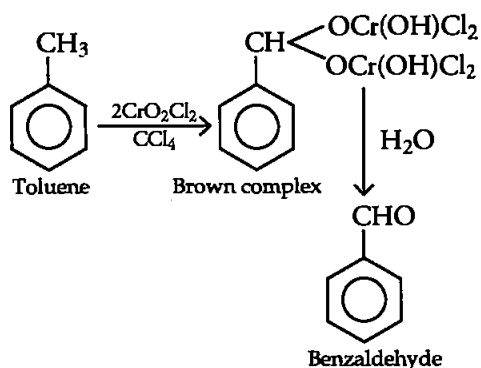
(ii) Benzoic acid and phenol



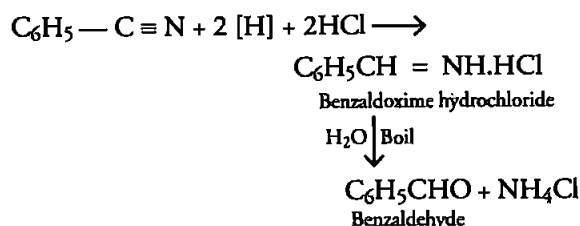
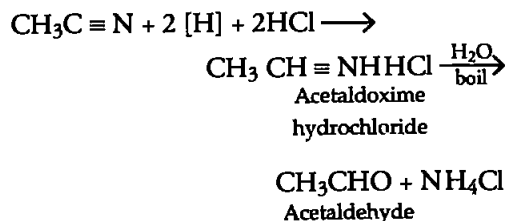

Thus, Benzoic acid gives sodium benzoate on reaction with sodium bicarbonate whereas phenol gives no reaction with sodium bicarbonate.

OR

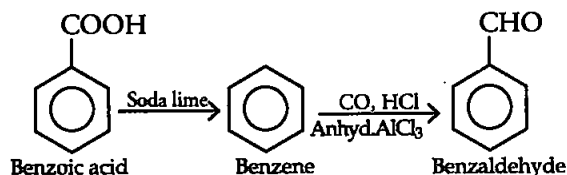
(a) (i) Etard reaction : The oxidation of toluene to benzaldehyde with chromyl chloride (CrO_2Cl_2) dissolved in CCl_4 or CS_2 .



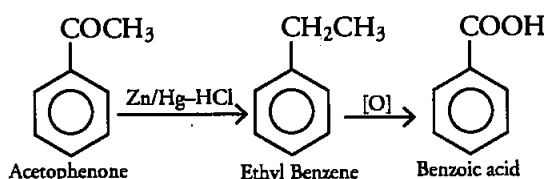
(ii) Stephen reaction : The partial reduction of alkyl or aryl cyanides to the corresponding aldehydes with a suspension of anhydrous SnCl_2 in ether saturated with HCl at room temperature followed by hydrolysis.



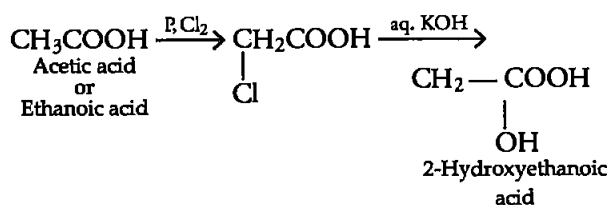
(b) (i) Benzoic acid to Benzaldehyde



(ii) Acetophenone to Benzoic acid



(iii) Ethanoic acid to 2-hydroxyethanoic acid



Students don't need to purchase any Guide, Question Bank or Sample/model paper from market. All material will be available on this website in the form of free PDFs by 30 September. On website www.cbsepdf.com following materials will be provided :

1. NCERT Solutions
2. Previous Years Papers (2011-2019)
3. Previous Years Chapterwise Question Bank
4. 20 Solved Sample Paper

Students can download from following website

www.cbsepdf.com

A mission for free content for all.