

# Chemistry 2017 (Outside Delhi)

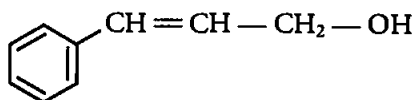
# SET II

Time allowed : 3 hours

Maximum marks : 70

Note : Except for the following questions, all the remaining questions have been asked in previous sets.

3. Write the IUPAC name of the following compound. [1]



Answer : 3-Phenyl-prop-2-en-1-ol

5. Out of and , which is an example of vinylic halide ? [1]

Answer : is an example of vinylic halide.

6. Using IUPAC norms write the formulae for the following :

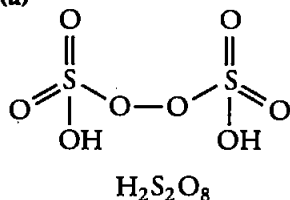
- (a) Tris (ethane-1, 2-diamine) chromium (III) chloride.  
 (b) Potassium tetrahydroxozincate (II). [2]

Answer : (a)  $[\text{Cr}(\text{en})_3]\text{Cl}_3$   
 (b)  $\text{K}_2[\text{Zn}(\text{OH})_4]$

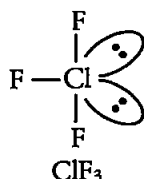
7. Draw the structures of the following : [1]

- (a)  $\text{H}_2\text{S}_2\text{O}_8$   
 (b)  $\text{ClF}_3$

Answer : (a)



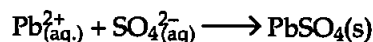
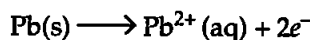
(b)



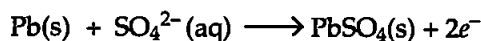
8. Write the name of the cell which is generally used in inverters. Write the reactions taking place at the anode and the cathode of this cell. [2]

Answer : Lead storage battery is commonly used in inverters.

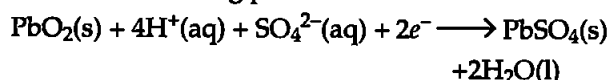
Reactions taking place at anode



The overall reaction at anode is



Reactions taking place at cathode.

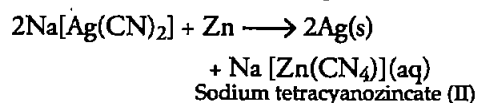
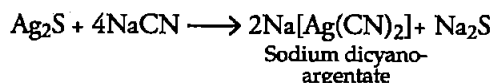


11. (a) Write the principle of vapour phase refining.  
 (b) Write the role of dilute NaCN in the extraction of silver.  
 (c) What is the role of collectors in the froth floatation process ? Give an example of a collector. [2]

Answer :

(a) Vapour phase refining : This method is based on the principle that certain metals are converted to their volatile compounds while the impurities are not affected during compound formation-C.

(b) NaCN is used to leach the silver ore in the presence of air. Pure silver is obtained by replacement in the process of extraction of silver.



(c) In the froth floatation process, collectors enhances the non-wettability of the mineral particles. Example of collectors are pine oil, eucalyptus oil, fatty acids etc.

16. Define the following :

(b) Narrow spectrum antibiotics.

(c) Antacids [3]

Answer :

(b) **Narrow spectrum antibiotics** : The antibiotics which are effective mainly against gram-positive or gram-negative bacteria are called narrow spectrum antibiotics Example: Penicillin.

(c) **Antacids** : The chemical substances which neutralizes excess acids in the gastric juices and gives relief from acid indigestion, acidity, heart burns and gastric ulcers are called antacids. Example Sodium hydrogen-carbonate (baking soda) in water.

17. Write the structures of the monomers used for getting the following polymers :

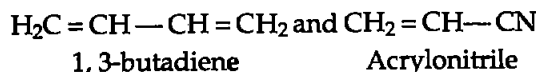
(a) Polyvinyl chloride (PVC)

(c) Buna-N [3]

Answer : (a) Monomer of polyvinyl chloride (PVC)



(c) Monomer of Buna-N



22. (a) Based on the nature of intermolecular forces, classify the following solids : \*\*

Benzene, Silver

(b) AgCl shows Frenkel defect while NaCl does not. Give reason. \*\*

(c) What type of semiconductor is formed when Ge is doped with Al ? \*\* [3]

Answer :

••

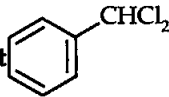
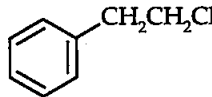
## Chemistry 2017 (Outside Delhi)

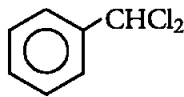
## SET III

Time allowed : 3 hours

Maximum marks : 70

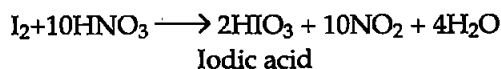
Note : Except for the following questions, all the remaining questions have been asked in previous sets.

1. Out  of  and , which is an example of a benzylic halide ? [1]

Answer :  is an example of benzylic halide.

3. Write the formula of the compound of iodine which is obtained when conc.  $\text{HNO}_3$  oxidises  $\text{I}_2$ . [1]

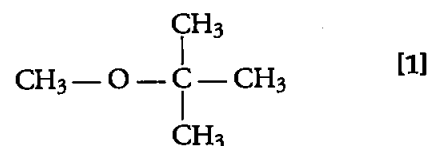
Answer : Iodic acid,  $\text{HIO}_3$  is obtained on the oxidation of  $\text{I}_2$  by  $\text{HNO}_3$ .



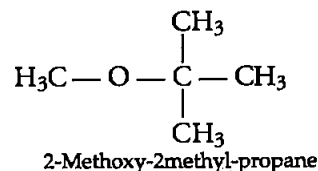
4. What type of colloid is formed when a gas is dispersed in a liquid ? Give an example. [1]

Answer : 'Foam' colloid is formed when a gas is dispersed in a liquid. For example whipped cream or soda water.

5. Write the IUPAC name of the following compound :



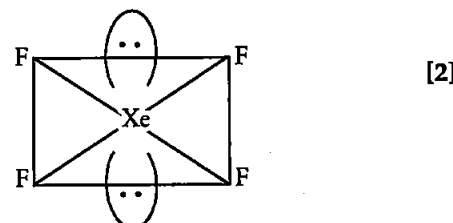
Answer :



6. Draw the structures of the following :

(a)  $\text{XeF}_4$

(b)  $\text{BrF}_5$

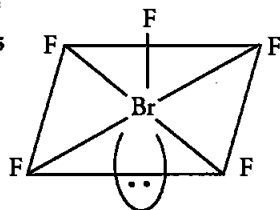


\*\*Answer is not given due to the change in present Syllabus.

Answer :

(a)  $\text{XeF}_4$

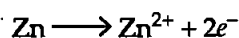
(b)  $\text{BrF}_5$



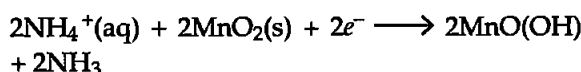
7. Write the name of the cell which is generally used in transistors. Write the reactions taking place at the anode and the cathode of this cell. [2]

Answer : Dry cells are used in transistors.

At anode



At cathode



9. Using IUPAC norms write the formulae for the following :

(a) Potassium trioxalatoaluminate (III).

(b) Dichloridobis (ethane-1, 2-diamine) cobalt (III) [2]

Answer :

(a)  $\text{K}_3[\text{Al}(\text{Ox})_3]$

(b)  $[\text{CoCl}_2(\text{en})_2]^{+}$

14. (a) Based on the nature of intermolecular forces, classify the following solids : \*\*

Sodium sulphate, Hydrogen

(b) What happens when  $\text{CdCl}_2$  is doped with  $\text{AgCl}$ ? \*\*

(c) Why do ferrimagnetic substances show better magnetism than antiferromagnetic substances? \*\* [3]

15. (a) Write the principle of electrolytic refining.  
 (b) Why does copper obtained in the extraction from copper pyrites have a blistered appearance ?  
 (c) What is the role of depressants in the froth floatation process ? [3]

Answer :

(a) **Electrolytic refining** : This method is based on the principle of electrolysis. In this method impure metal is made to act as anode and a strip of same metal in pure form is used as cathode. Both anode and cathode are placed in a suitable electrolytic bath containing soluble salt of same metals.

(b) In the extraction of copper from  $\text{CuFeS}_2$ ,  $\text{SO}_2$ ,  $\text{N}_2$  and  $\text{O}_2$  escape from the metal. As the metal solidifies, the dissolved gases escape producing blisters on the metal surface, which provides blister appearance to copper.

(c) **Depressants** are used to prevent certain types of particles from forming the froth with air bubbles. For example :  $\text{NaCN}$  can be used as a depressant in the separation of  $\text{ZnS}$  and  $\text{PbS}$ .

19. Define the following :

(a) Cationic detergents

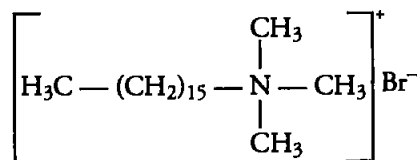
(b) Broad spectrum antibiotics

(c) Tranquilizers

[3]

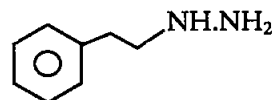
Answer :

(a) **Cationic detergents** : These are the quaternary ammonium salts of amines with acetates, chlorides or bromides as anions. The cationic part possesses a long hydrocarbon chain with a positive charge on nitrogen atom. Example. Cetyltrimethyl ammonium chloride.



(b) **Broad spectrum antibiotics** : Antibiotics which kills or inhibit a wide range of gram-positive and gram-negative bacteria are called broad spectrum antibiotics. Example Chloramphenicol.

(c) **Tranquilizers** : The chemical substances used for the treatment of stress, fatigue, mild and severe mental diseases are called tranquilizers. Example : Phenelzine (Nardil).



20. Write the structures of the monomers used for getting the following polymers :

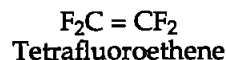
(a) Teflon

(c) Neoprene

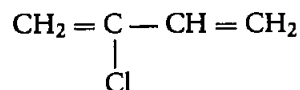
[3]

Answer :

(a) **Monomer of Teflon** :



(c) **Neoprene (monomer)** :



Chloroprene or  
2-chlorobuta-1,3-diene

\*\*Answer is not given due to the change in present Syllabus.

# Chemistry 2017 (Delhi)

# SET I

Time allowed : 3 hours

Maximum marks : 70

## SECTION-A

1. Write the formula of an oxo-anion of Manganese (Mn) in which it shows the oxidation state equal to its group number. [1]

Answer : Manganese belongs to group number 7 and its oxidation state in  $\text{KMnO}_4$  is +7 i.e.,

$$\begin{aligned} \text{KMnO}_4 \\ 1 + x + 4(-2) &= 0 \\ 1 + x - 8 &= 0 \\ x &= 7 \end{aligned}$$

Thus, the formula of the oxo-anion is  $\text{KMnO}_4$ .

2. Write IUPAC name of the following compound :  $(\text{CH}_3\text{CH}_2)_2\text{NCH}_3$  [1]

Answer : N-Ethyl-N-methylethanamine.

3. For a reaction  $\text{R} \longrightarrow \text{P}$ , half-life ( $t_{1/2}$ ) is observed to be independent of the initial concentration of reactants. What is the order of reaction ? [1]

Answer : Since half life is independent of the initial concentration of the reactants. Thus it is a first order Reaction. Formula for half-life of the first order reaction.

$$t_{1/2} = \frac{0.693}{K}$$

4. Write the structure of 1-bromo-4-chlorobut-2-ene. [1]

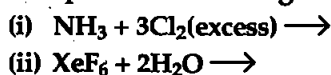
Answer :  $\text{BrCH}_2\text{CH}=\text{CHCH}_2\text{Cl}$

5. Write one similarity between physisorption and Chemisorption. [1]

Answer : Physisorption and chemisorption both are the surface phenomenon and both increases the surface area during the process of adsorption.

## SECTION-B

6. Complete the following reactions :



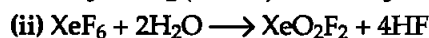
OR

What happens when

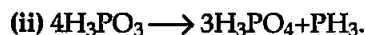
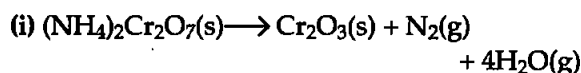
- (i)  $(\text{NH}_4)_2\text{Cr}_2\text{O}_7$  is heated ?  
 (ii)  $\text{H}_3\text{PO}_3$  is heated ?

Write the equations. [2]

Answer :



OR



7. Define the following terms :

- (i) Colligative properties  
 (ii) Molality ( $m$ ) [2]

Answer : (i) Colligative properties are those which depends on number of moles of solute irrespective of their Nature.

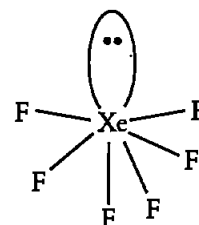
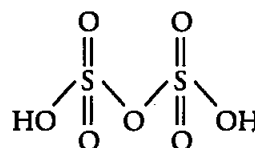
(ii) Molality is defined as the number of moles of solute dissolved per kg of the solvent. It is independent of temperature.

$$\text{Molality} = \frac{\text{Moles of solute}}{\text{Mass of solvent in kilograms}}$$

8. Draw the structures of the following :



Answer :



9. Calculate the degree of dissociation ( $\alpha$ ) of acetic acid if its molar conductivity ( $\wedge_m$ ) is  $39.05 \text{ S cm}^2 \text{ mol}^{-1}$ .

Given  $\wedge^\circ(\text{H}^+) = 349.6 \text{ S cm}^2 \text{ mol}^{-1}$  and  $\wedge^\circ(\text{CH}_3\text{COO}^-) = 40.9 \text{ S cm}^2 \text{ mol}^{-1}$ . [2]

Answer : Given : Molar conductivity ( $\wedge_m$ ) for acetic acid =  $39.05 \text{ S cm}^2 \text{ mol}^{-1}$ .

$$\wedge^\circ(\text{H}^+) = 349.6 \text{ S cm}^2 \text{ mol}^{-1}$$

$$\wedge^\circ(\text{CH}_3\text{COO}^-) = 40.95 \text{ S cm}^2 \text{ mol}^{-1}$$

We know that :

$$\begin{aligned}\Delta_m^\circ(\text{CH}_3\text{COOH}) &= \Delta_m^\circ(\text{H}^+) + \Delta_m^\circ(\text{CH}_3\text{COO}^-) \\ 390.5 &= 349.6 + 40.9 \\ 390.5 &= 390.5\end{aligned}$$

also;

$$\alpha = \frac{\Delta_m}{\Delta_m^\circ}$$

$$\alpha = \frac{39.05}{390.5}$$

$$\alpha = 0.1$$

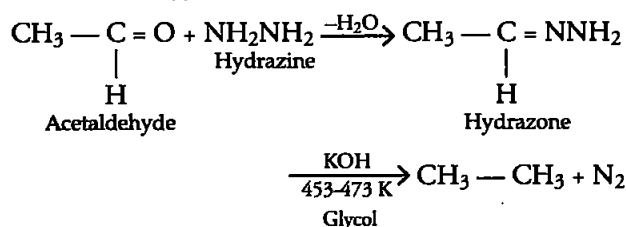
Thus, the degree of dissociation of acetic acid is 0.1.

10. Write the equations involved in the following reactions :

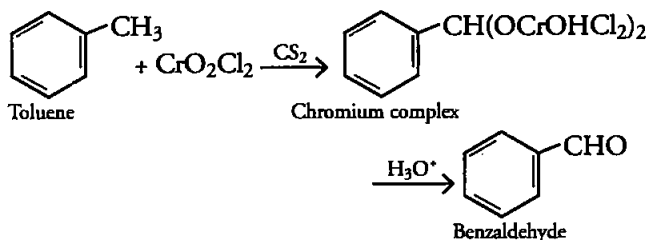
(i) Wolff-Kishner reduction

(ii) Etard reaction. [2]

Answer : (i) Wolff-Kishner reduction :



(ii) Etard Reaction :



### SECTION-C

11. A 10% solution (by mass) of sucrose in water has freezing point of 269.15 K. Calculate the freezing point of 10% glucose in water, if freezing point of pure water is 273.15 K.

[Given : (Molar mass of sucrose = 342 g mol<sup>-1</sup>)  
(Molar mass of glucose = 180 g mol<sup>-1</sup>) [3]

Answer : Given : Freezing point of = 269.15 K  
10% solution of glucose  
Freezing point of pure water = 273.15 K  
Molar mass of sucrose = 342 g mol<sup>-1</sup>.  
Molar mass of glucose = 180 g mol<sup>-1</sup>.  
We know that :

$$\Delta T_f = K_f \times m$$

Also;

$$m = \frac{W_2 \times 1000}{M_2 \times M_1}$$

For the sucrose solution :

$$273.15 - 269.15 = \frac{K_f \times 10 \times 1000}{342 \times 90}$$

$$4 \times 242 \times 90 = K_f \times 10 \times 1000$$

$$\frac{4 \times 342 \times 90}{10 \times 1000} = K_f$$

$$K_f = 12.3 \text{ k kg/mol}$$

For the glucose solution :

$$\Delta T_f = K_f \times m$$

$$= \frac{12.3 \times 10 \times 1000}{180 \times 90}$$

$$\Delta T_f = 7.6 \text{ K}$$

Thus

$$T_f = 273.15 - 7.6$$

$$T_f = 265.5 \text{ K}$$

The freezing point of 10% glucose in water is 265.5 K.

12. (a) Calculate the mass of Ag deposited at cathode when a current of 2 amperes was passed through a solution of AgNO<sub>3</sub> for 15 minutes.

Given : Molar mass of Ag = 108 g mol<sup>-1</sup>,  
1F = 96500 C mol<sup>-1</sup>

(b) Define fuel cell [3]

Answer :

(a) Given :

Current = 2 amperes

Time = 15 minutes

Molar mass of Ag = 108 g mol<sup>-1</sup>

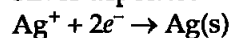
1F = 96500 C mol<sup>-1</sup>

Amount of metal deposited ( $m$ ) =  $ZQ$

$Q = It$

$$= 2 \times 15 \times 60 = 1800 \text{ C}$$

Silver deposited



1 mole of electron or 1 × 96500 C of current deposit

silver = 108 g

1800 C of current will deposit

$$= \frac{108 \times 1800}{96500}$$

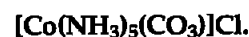
Amount of Ag deposited = 2.01g

(b) Fuel cell is the cell which converts the energy of combustion of fuels directly into electrical energy.

13. (i) What type of isomerism is shown by the complex [Co(NH<sub>3</sub>)<sub>6</sub>][Cr(CN)<sub>6</sub>] ?

(ii) Why a solution of [Ni(H<sub>2</sub>O)<sub>6</sub>]<sup>2+</sup> is green while a solution of [Ni(CN)<sub>4</sub>]<sup>2-</sup> is colourless ? (At no. of Ni = 28)

(iii) Write the IUPAC name of the following complex : [3]



Answer :

(i) Both shows coordination isomerism because both cationic and anionic entities and isomers differ in the distribution of ligands in the coordination entity of cationic and anionic part.

(ii) In [Ni(H<sub>2</sub>O)<sub>6</sub>]<sup>2+</sup> Ni is in +2 oxidation state

with electronic configuration  $3d^8$ . In the presence of weak ligand  $H_2O$  the two unpaired electrons do not pair up and hence the complex has two unpaired electrons. Therefore, it is coloured and shows  $d-d$  transitions which absorbs red light and emits green complimentary light.

In case of  $[Ni(CN)_4]^{2-}$  Ni also shows +2 oxidation state but CN ligand is strong ligand and two unpaired electrons undergo pairing, to no  $d-d$  transitions takes place and it shows no colour.

(iii) Pentaamminecarbonatocobalt(III) chloride.

14. Write one difference in each of the following :

(i) Lyophobic sol and Lyophilic sol.

(ii) Solution and Colloid

(iii) Homogeneous catalysis and Heterogeneous catalysis. [3]

Answer :

(i) Lyophobic colloidal sols are not hydrated and have weak affinity with the dispersion medium whereas lyophilic colloidal sols are heavily hydrated and have strong affinity with the dispersion medium.

(ii) Solution is a homogeneous mixture of solute and solvent whereas colloid is the heterogeneous mixture of dispersed phase and dispersion medium.

(iii) Homogeneous catalysis is the catalysis in which the reactants and the catalysts are in the same phase whereas in the heterogeneous catalysis the reactants and the catalysts are in the different phases.

15. Following data are obtained for reaction :



t/s	0	300	600
$[N_2O_5]/mol L^{-1}$	$1.6 \times 10^{-2}$	$0.8 \times 10^{-2}$	$0.4 \times 10^{-2}$

(a) Shows that it follows first order reaction.

(b) Calculate the half-life.

$$(\text{Given } \log 2 = 0.3010, \log 4 = 0.6021) \quad [3]$$

Answer :

$$\begin{aligned} \text{(a)} \quad K &= 2.303/t \log [A_0]/[A] \\ &= 2.303/300 \log 1.6 \times 10^{-2}/0.8 \times 10^{-2} \\ &= 2.303/300 \log 2 = 2.31 \times 10^{-3} s^{-1} \\ &= \text{At } 600 \text{ s, } K = 2.303/t \log [A_0]/[A] \\ &= 2.303/300 \log 1.6 \times 10^{-2}/0.4 \times 10^{-2} \\ &= 2.303/600 \log 4 = 2.31 \times 10^{-3} s^{-1} \end{aligned}$$

Since K is constant when using first order equation therefore, it follows first order kinetics.

$$\begin{aligned} \text{(b)} \quad t_{1/2} &= 0.693/k \\ &= 0.693/2.31 \times 10^{-3} = 300 \text{ s} \end{aligned}$$

Thus, the half life of the reaction is 300 s.

16. Following compounds are given to you :

2-Bromopentane, 2-Bromo-2-methylbutane,

1-Bromopentane

(i) Write the compound which is most reactive towards  $S_N2$  reaction.

(ii) Write the compound which is optically active.

(iii) Write the compound which is most reactive towards  $\beta$ -elimination reaction. [3]

Answer : (i) 1-Bromopentane is most reactive towards  $S_N2$  reaction as it follows the order  $1^\circ > 2^\circ > 3^\circ$ .

(ii) 2-Bromopentane is optically active.

(iii) 2-Bromo-2-methylbutane is most reactive towards  $\beta$ -elimination reaction.

17. (a) Write the principle of method used for the refining of germanium.

(b) Out of  $PbS$  and  $PbCO_3$  (ores of lead), which one is concentrated by froth floatation process preferably ?

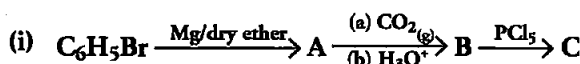
(c) What is the significance of leaching in the extraction of aluminium ? [3]

Answer : (a) Zone refining method is used for the refining of germanium and it is based on the principle that the impurities are more soluble in the melt than in the solid state of the metal.

(b)  $PbS$ , Sulphide ore has more tendency to stick to the oil which comes on the surface being lighter and easily skimmed off so  $PbS$  is concentrated by froth floatation method.

(c) Leaching of alumina is done to remove the impurities like  $SiO_2$  by using  $NaOH$  solution and pure alumina is obtained.

18. Write structures of compounds A, B and C in each of the following reactions : [3]



OR

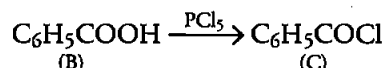
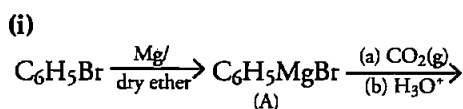
Do the following conversions in not more than two steps :

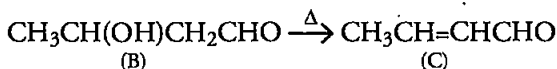
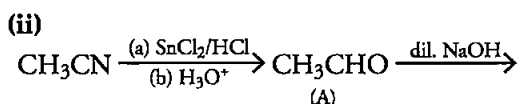
(a) Benzoic acid to Benzaldehyde

(b) Ethyl benzene to Benzoic acid

(c) Propanone to Propene

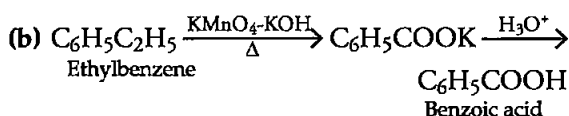
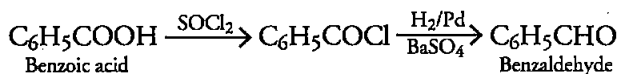
Answer :



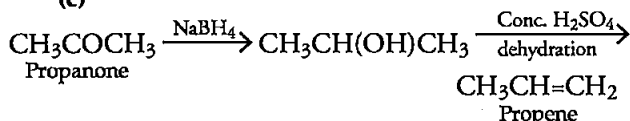


OR

(a)



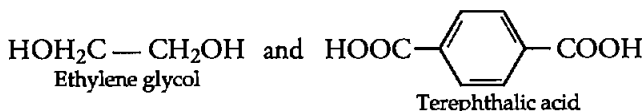
(c)



19. Write the structure of the monomers used for getting the following polymers :

(i) Dacron [3]

Answer : (i) Monomers of Dacron :



21. Give reasons :

(i) Thermal stability decreases from  $\text{H}_2\text{O}$  to  $\text{H}_2\text{Te}$ .

(ii) Fluoride ion has higher hydration enthalpy than chloride ion.

(iii) Nitrogen does not form pentahalide.\*\* [3]

Answer :

(i) As we move down in a group atomic radius increases as a result bond length increases. Larger the bond length lesser will be the bond dissociation enthalpy. So thermal stability decreases from O to Te.

(ii) Fluoride ion is the smallest ion in the group and it has high charge density and charge size ratio. That is why it has high hydration enthalpy.

## SECTION-E

24. (a) Account for the following :

(i) Transition metals form large number of complex compounds.

(ii) The lowest oxide of transition metal is basic whereas the highest oxide is amphoteric or acidic.

(iii)  $E^\circ$  value for the  $\text{Mn}^{3+}/\text{Mn}^{2+}$  couple is highly positive (+1.57 V) as compare to  $\text{Cr}^{3+}/\text{Cr}^{2+}$ .

\*\* Answer is not given due to change in present syllabus.

(b) Write one similarity and one difference between the chemistry of lanthanoid and actinoid elements. [5]

OR

(a) (i) How is the variability in oxidation states of transition metals different from that of the *p*-block elements ?(ii) Out of  $\text{Cu}^+$  and  $\text{Cu}^{2+}$ , which ion is unstable in aqueous solution and why ?(iii) Orange colour of  $\text{Cr}_2\text{O}_7^{2-}$  ion changes to yellow when treated with an alkali. Why ?

(b) Chemistry of actinoids is complicated as compared to lanthanoids. Give two reasons.

Answer :

(i) Transition metals forms large number of complexes due to :

1. Small size of atoms and ions of transition metals.

2. High nuclear charge.

3. Presence of incompletely filled *d*-orbitals.

(ii) As the oxidation state increases the size of ion goes on decreasing thus the covalent character increases as a result of this amphoteric and acidic strength increases. While in case of lower oxides of transition metals ionic size increases and thus basic character increases.

(iii) Because  $\text{Mn}^{2+}$  has  $3d^5$  as a stable oxidation state which is half filled and stable. Mn has very high third ionization energy for change from  $d^5$  to  $d^4$  but in case of  $\text{Cr}^{3+}$ ,  $3d^3$  is more stable due to completely half filled  $t_{2g}$  orbitals (crystal field spitting theory) and that is why  $\text{Mn}^{3+}/\text{Mn}^{2+}$  is highly positive as compared to  $\text{Cr}^{3+}/\text{Cr}^{2+}$ .(b) Both Lanthanoids and Actinoids have the  $t_3$  oxidation state and both show contraction or irregular electronic configuration while the major difference between the lanthanoids and actinoids is actinoids are radioactive while lanthanoids are not; radioactive in nature.

OR

(a) (i) In *p* block elements the difference in oxidation state is 2 and in transition elements the difference is 1.(ii)  $\text{Cu}^+$  is unstable in aq. solution because it undergoes disproportion reaction and has low hydration enthalpy.

(iii) In alkaline medium dichromate ions  $\text{Cr}_2\text{O}_7^{2-}$  changes to chromate ion  $\text{CrO}_4^{2-}$ , which is yellow in colour due to which the colour changes when treated with an alkali.

(b) Chemistry of actinoids is complicated as compared to lanthanoids due to the following reasons :

- They show multiple oxidation states namely +5, +6 and +7 oxidation states respectively which permits the formation of higher oxidation states through the removal of the periphery electrons.
- They are radioactive and have a strong propensity to form complex reactions because of its unstable isotopes, some actinoids are formed naturally by radioactive decay.

25. (a) An element has atomic mass  $93\text{ g mol}^{-1}$  and density  $11.5\text{ g cm}^{-3}$ . If the edge length of its unit cell is  $300\text{ pm}$ , identify the type of unit cell.\*\*

(b) Write any two differences between amorphous solids and crystalline solids.\*\* [5]

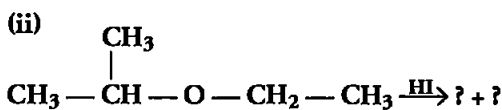
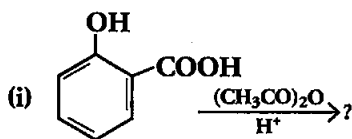
OR

(a) Calculate the number of unit cells in  $8.1\text{ g}$  of aluminium if it crystallizes in a f.c.c. structure. (Atomic mass of Al =  $27\text{ g mol}^{-1}$ )

(b) Give reasons : \*\*

- In stoichiometric defects, NaCl exhibits Schottky defect and not Frenkel defect.
- Silicon on doping with phosphorous forms *n*-type semiconductor.
- Ferrimagnetic substances show better magnetism than antiferromagnetic substances.

26. (a) Write the product(s) in the following reactions :



(b) Give simple chemical tests to distinguish between the following pairs of compounds :

- Ethanol and Phenol
- Propanol and 2-methylpropan-2-ol [5]

OR

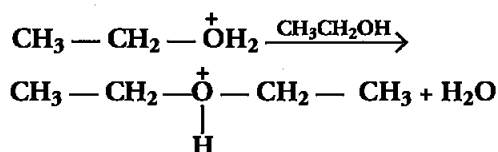
(a) Write the formula of reagents used in the following reactions :

- Bromination of phenol to 2, 4, 6-tribromophenol
- Hydroboration of propene and then oxidation to propanol.

(b) Arrange the following compound groups in the increasing order of their property indicated :

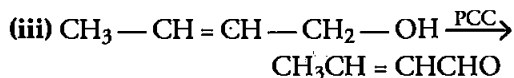
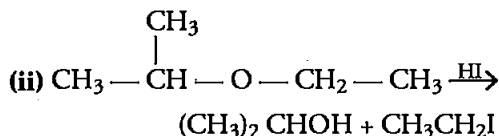
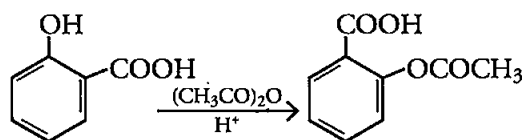
- p*-nitrophenol, ethanol, phenol (acidic character)
- Propanol, propane, Propanal (boiling point)

(c) Write the mechanism (using curved arrow notation) of the following reaction :



Answer :

(a) (i)



(b) (i) Ethanol and phenol : When neutral ferric chloride is added to both the compounds phenol gives violet coloured complex whereas ethanol does not give this complex when treated with ferric chloride solution.

(ii) Propanol and 2-methyl propan-2-ol : When both the solutions were treated with anhydrous  $\text{ZnCl}_2$  and conc. HCl (Luca's test) the 2-methylpropan-2-ol gives the turbidity

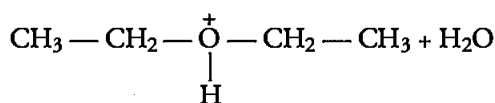
\*\*Answer is not given due to the change in present Syllabus.



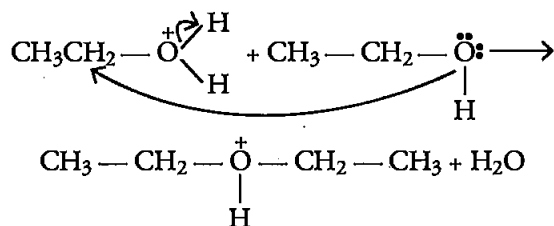
immediately whereas propanol does not gives the turbidity immediately.

OR

- (a) (i) Aq-Br<sub>2</sub>  
 (ii) B<sub>2</sub>H<sub>6</sub> and then H<sub>2</sub>O<sub>2</sub> and OH<sup>-</sup>  
 (b) (i) Ethanol < Phenol < *p*-Nitrophenol.  
 (ii) Propane < Propanal < Propanol  
 (c) CH<sub>3</sub> — CH<sub>2</sub> — OH<sub>2</sub><sup>+</sup>  $\xrightarrow{\text{CH}_3\text{CH}_2\text{OH}}$



Mechanism for this above reaction is :



## Chemistry 2017 (Delhi)

## SET II

Time allowed : 3 hours

Maximum marks : 70

Note : Except for the following questions, all the remaining questions have been asked in previous sets.

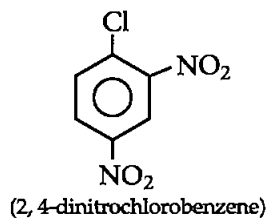
$$x = 6$$

Thus, the formula of the oxo-anion is K<sub>2</sub>Cr<sub>2</sub>O<sub>7</sub>

### SECTION-B

1. Write the structure of 2, 4-dinitrochlorobenzene. [1]

Answer :



4. Write IUPAC name of the following compound :  
 CH<sub>3</sub>NHCH(CH<sub>3</sub>)<sub>2</sub> [1]

Answer : N-methylpropan-2-amine.

5. Write the formula of an oxo-anion of chromium (Cr) in which it shows the oxidation state equal to its group number. [1]

Answer : Chromium belongs to group number 6 and its oxidation state in K<sub>2</sub>Cr<sub>2</sub>O<sub>7</sub> is +6 i.e.,



$$1 \times 2 + 2x + (-2 \times 7) = 0$$

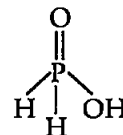
$$2 + 2x - 14 = 0$$

$$2x - 12 = 0$$

$$2x = 12$$

7. Draw the structures of the following :  
 H<sub>3</sub>PO<sub>2</sub> [2]

Answer :



8. Define the following terms :  
 (i) Ideal solution  
 (ii) Molarity (M) [2]

Answer : (i) Ideal solutions are those solutions that obeys Raoult's law over entire range of concentration. Example : Benzene and toluene, *n*-heptane and *n*-hexane.

(ii) Molarity is defined as the number of moles of solute dissolved per liter of solution.

$$M = \frac{W_b \times 1000}{M_b \times V}$$

9. Complete the following reactions : [2]  
 (i) Cl<sub>2</sub> + H<sub>2</sub>O →  
 (ii) XeF<sub>6</sub> + 3H<sub>2</sub>O →

OR

What happens when

- (i) conc. H<sub>2</sub>SO<sub>4</sub> is added to Cu ?

(ii)  $\text{SO}_3$  is passed through water ?  
Write the equations.

Answer : (i)  $\text{Cl}_2 + \text{H}_2\text{O} \rightarrow 2\text{HCl} + [\text{O}]$

(ii)  $\text{XeF}_6 + 3\text{H}_2\text{O} \rightarrow \text{XeO}_3 + 6\text{HF}$

OR

(i)  $\text{Cu} + 2\text{H}_2\text{SO}_4 \rightarrow \text{CuSO}_4 + \text{SO}_2 + 2\text{H}_2\text{O}$

(ii)  $\text{SO}_3 + \text{H}_2\text{O} \rightarrow \text{H}_2\text{SO}_4$

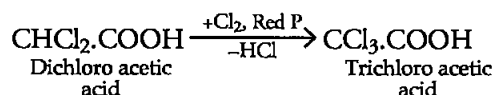
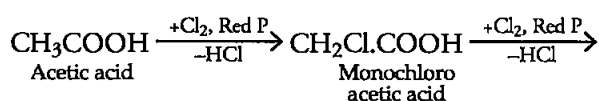
10. Write the reactions involved in the following :

(i) Hell-Volhard-Zelinsky reaction

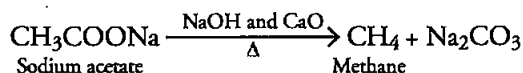
(ii) Decarboxylation reaction [2]

Answer :

(i) Hell-Volhard Zelinsky reaction :



(ii) Decarboxylation reaction :



SECTION-C

13. Write the principles of the following methods :

(i) Vapour phase refining [3]

Answer : (i) Vapour phase refining : It is based on the principle that the metal is converted into its volatile compound and collected elsewhere. It is then decomposed to give pure metal.

15. Define the following :

(iii) Disinfectants [3]

Answer : (iii) Disinfectants : These are the substances that are applied to non-living objects to destroy microorganisms that are present on the objects. Example : 1-2% Phenol solution.

••

## Chemistry 2017 (Delhi)

## SET III

Time allowed : 3 hours

Maximum marks : 70

Note : Except for the following questions, all the remaining questions have been asked in previous sets.

### SECTION-A

4. Write the structure of 3-Bromo-2-methylprop-1-ene. [1]

Answer :  $\text{BrCH}_2(\text{CH}_3)\text{C} = \text{CH}_2$

5. Write IUPAC name of the following compound :  $(\text{CH}_3)_2\text{N}-\text{CH}_2\text{CH}_3$  [1]

Answer : N,N-dimethylethanamine

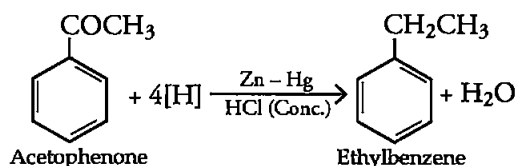
### SECTION-B

6. Write the reactions involved in the following reactions :

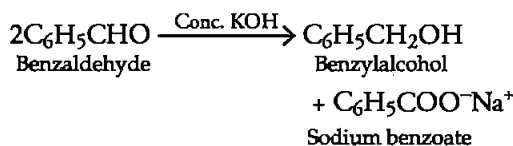
(i) Clemmensen reduction

(ii) Cannizzaro reaction [2]

Answer : (i) Clemmensen reduction :



(ii) Cannizzaro reaction :



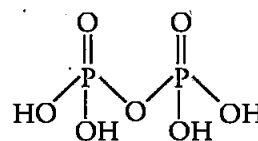
7. Draw the structures of the following :

(i)  $\text{H}_4\text{P}_2\text{O}_7$

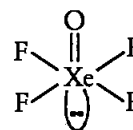
(ii)  $\text{XeOF}_4$  [2]

Answer : (i)

$\text{H}_4\text{P}_2\text{O}_7$



(ii)  $\text{XeOF}_4$



8. Define the following terms :

(ii) van't Hoff factor (*i*) [2]

**Answer :** (ii) **van't Hoff factor (*i*) :** It is defined as the extent of dissociation or association or the ratio of the observed colligative property to the calculated colligative property.

10. Complete the following chemical equations : [2]

(i)  $F_2 + 2Cl^- \rightarrow$

(ii)  $2XeF_2 + 2H_2O \rightarrow$

OR

What happens when

(i) HCl is added to  $MnO_2$  ?

(ii)  $PCl_5$  is heated ?

write the equations involved.

**Answer :** (i)  $F_2 + 2Cl^- \rightarrow 2F^- + Cl_2$

(ii)  $2XeF_2 + 2H_2O \rightarrow 2Xe + 4HF + O_2$

OR

(i)  $MnO_2 + 4HCl \rightarrow MnCl_2 + Cl_2 + 2H_2O$

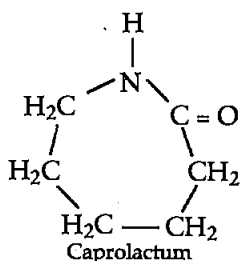
(ii)  $PCl_5 \xrightarrow{\Delta} PCl_3 + Cl_2$

### SECTION-C

14. Write the structures of the monomers used for getting the following polymers :

(i) Nylon-6 [3]

**Answer :** (i) **Monomers of Nylon-6 :**



19. Write one difference between each of the following :

(i) Multimolecular colloid and Macromolecular colloid

(ii) Sol and Gel

(iii) O/W emulsion and W/O emulsion [3]

**Answer :**

(i) In multimolecular colloids a large number of atoms or smaller molecules of a substance aggregates together to form species having size in the colloidal range. Example : Sulphur sol whereas in macro-molecular colloids the colloidal particles are large molecules having colloidal dimensions. Example : Starch.

(ii) In sol the dispersing phase is solid and dispersing medium is liquid; Example : paint, gold sol etc., whereas in Gel the dispersing phase is liquid and dispersing medium is solid; Example : Jelly, butter etc.

(iii) In O/W emulsion, oil is the dispersed phase while water is the dispersion medium. Example : milk, vanishing cream etc whereas in W/O emulsion water is the dispersed phase while oil is the dispersion medium. Example: Cold cream, butter etc.

20. (i) What type of isomerism is shown by the complex  $[Co(en)_3]Cl_3$  ?

(ii) Write the hybridisation and magnetic character of  $[Co(C_2O_4)_3]^{3-}$

(At. no. of Co = 27)

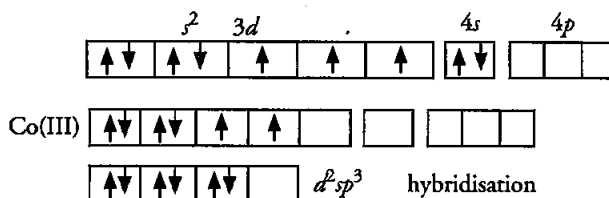
(iii) Write IUPAC name of the following Complex  $[Cr(NH_3)_3Cl_3]$ . [3]

**Answer :**

(i) Since the given coordinate compound does not have a plane of symmetry and the ligand attached is bidentate ligand so it will show optical isomerism.

(ii)  $[Co(C_2O_4)_3]^{3-}$  Co is in +3 oxidation state with electronic configuration of  $3d^6$  Oxalate is a strong field ligand so pairing of electrons take place.

CO:-  $3d^7 4s^2$



(iii) Triamminetrichloridochromium(III).

Students don't need to purchase any Guide, Question Bank or Sample/model paper from market. All material will be available on this website in the form of free PDFs by 30 September. On website [www.cbsepdf.com](http://www.cbsepdf.com) following materials will be provided :

1. NCERT Solutions
2. Previous Years Papers (2011-2019)
3. Previous Years Chapterwise Question Bank
4. 20 Solved Sample Paper

Students can download from following website

[www.cbsepdf.com](http://www.cbsepdf.com)

A mission for free content for all.

Students don't need to purchase any Guide, Question Bank or Sample/model paper from market. All material will be available on this website in the form of free PDFs by 30 September. On website [www.cbsepdf.com](http://www.cbsepdf.com) following materials will be provided :

1. NCERT Solutions
2. Previous Years Papers (2011-2019)
3. Previous Years Chapterwise Question Bank
4. 20 Solved Sample Paper

Students can download from following website

[www.cbsepdf.com](http://www.cbsepdf.com)

A mission for free content for all.